
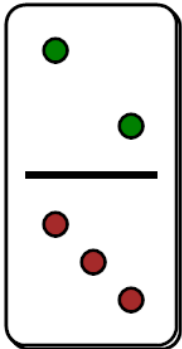




## Fraction Dominoes - To Fraction (Simple)



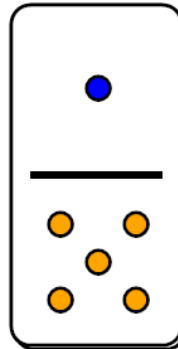
1



How would you write this domino fraction?

A	$\frac{3}{2}$	B	$\frac{2}{3}$
---	---------------	---	---------------

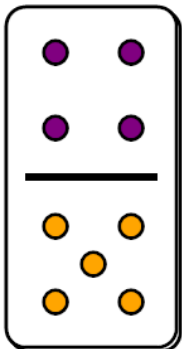
2



How would you write this domino fraction?

A	$\frac{5}{1}$	B	$\frac{1}{5}$
---	---------------	---	---------------

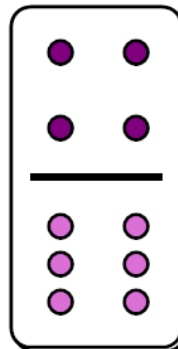
3



How would you write this domino fraction?

A	$\frac{5}{4}$	B	$\frac{4}{5}$
---	---------------	---	---------------

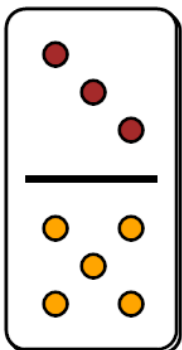
4



How would you write this domino fraction?

A	$\frac{6}{4}$	B	$\frac{4}{6}$
---	---------------	---	---------------

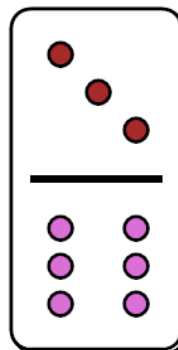
5



How would you write this domino fraction?

A	$\frac{3}{5}$	B	$\frac{5}{3}$
---	---------------	---	---------------

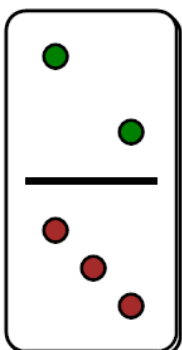
6



How would you write this domino fraction?

A	$\frac{6}{3}$	B	$\frac{3}{6}$
---	---------------	---	---------------

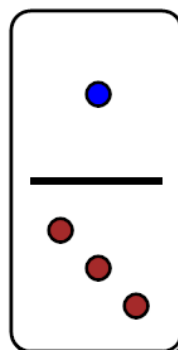
7



How would you write this domino fraction?

A	$\frac{2}{3}$	B	$\frac{3}{2}$
---	---------------	---	---------------

8



How would you write this domino fraction?

A	$\frac{1}{3}$	B	$\frac{3}{1}$
---	---------------	---	---------------