

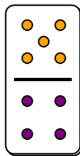
## Fraction Dominoes - To Domino (Improper)

1

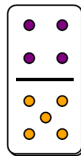
$$\frac{5}{4}$$

Which domino shows this fraction?

A



B

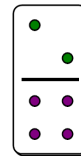


2

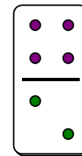
$$\frac{4}{2}$$

Which domino shows this fraction?

A



B

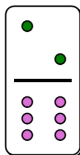


3

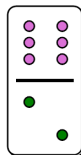
$$\frac{6}{2}$$

Which domino shows this fraction?

A



B

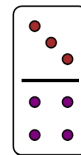


4

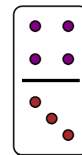
$$\frac{4}{3}$$

Which domino shows this fraction?

A



B



5

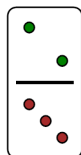
$$\frac{3}{2}$$

Which domino shows this fraction?

A



B

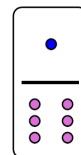


6

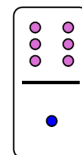
$$\frac{6}{1}$$

Which domino shows this fraction?

A



B




7

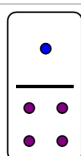
$$\frac{4}{1}$$

Which domino shows this fraction?

A



B

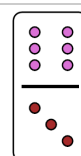


8

$$\frac{6}{3}$$

Which domino shows this fraction?

A



B

