



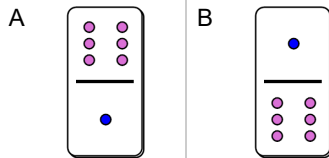
Fraction Dominoes - To Domino (Mixed)



1

6

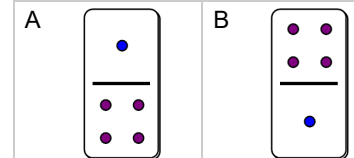
Which domino shows this fraction?



2

4

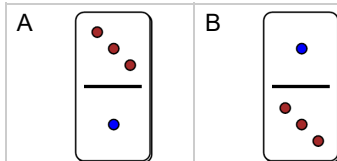
Which domino shows this fraction?



3

3

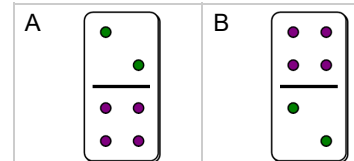
Which domino shows this fraction?



4

2

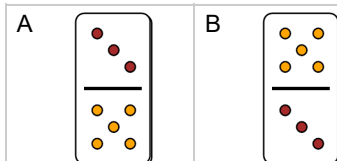
Which domino shows this fraction?



5

 $1\frac{2}{3}$

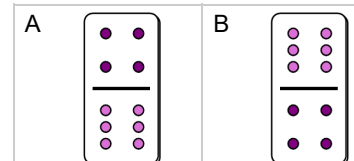
Which domino shows this fraction?



6

 $1\frac{2}{4}$

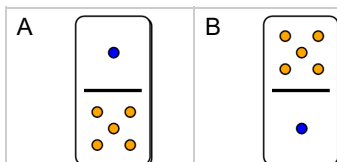
Which domino shows this fraction?



7

5

Which domino shows this fraction?



8

 $1\frac{1}{2}$

Which domino shows this fraction?

