




Fraction Dominoes - To Domino (Simple)

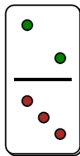


1

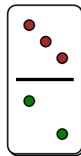
$$\frac{2}{3}$$

Which domino shows this fraction?

A



B

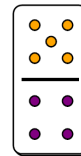


2

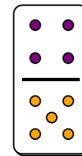
$$\frac{4}{5}$$

Which domino shows this fraction?

A



B

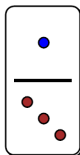


3

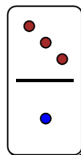
$$\frac{1}{3}$$

Which domino shows this fraction?

A



B

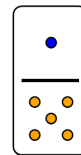


4

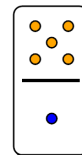
$$\frac{1}{5}$$

Which domino shows this fraction?

A



B

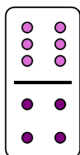


5

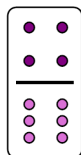
$$\frac{4}{6}$$

Which domino shows this fraction?

A



B

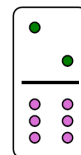


6

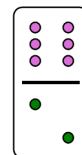
$$\frac{2}{6}$$

Which domino shows this fraction?

A



B

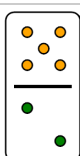


7

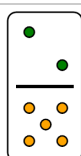
$$\frac{2}{5}$$

Which domino shows this fraction?

A



B

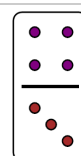


8

$$\frac{3}{4}$$

Which domino shows this fraction?

A



B

