
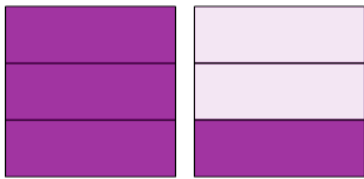




Fraction Dominoes - Shapes To Domino (Mixed)

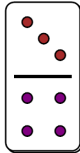


1

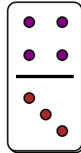


Which domino fraction shows this value?

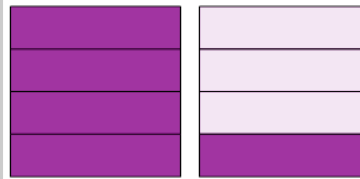
A



B

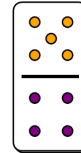


2

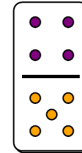


Which domino fraction shows this value?


A



B

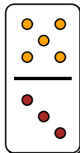


3

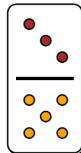


Which domino fraction shows this value?

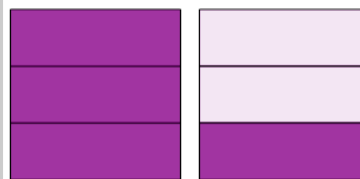
A



B

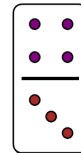


4

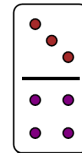


Which domino fraction shows this value?


A



B

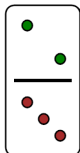


5



Which domino fraction shows this value?

A



B

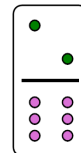


6

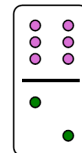


Which domino fraction shows this value?


A



B

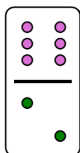


7

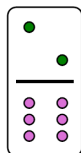


Which domino fraction shows this value?


A



B

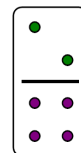


8



Which domino fraction shows this value?

A



B

