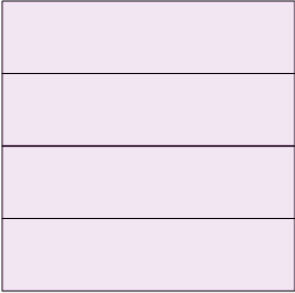
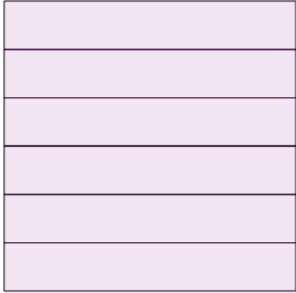
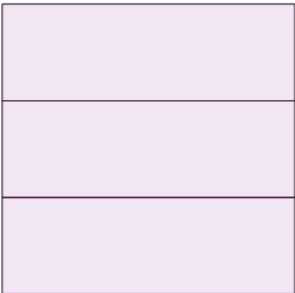

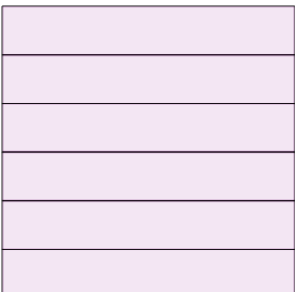
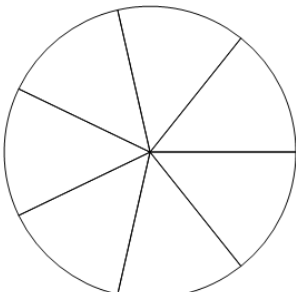
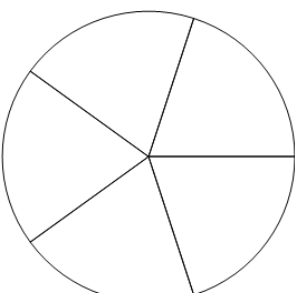





## Fraction Equal Parts - How Many Equal Parts



<b>1</b> How many equal parts is this rectangle divided into? 	A 4	B 8	C 7	<b>2</b> How many equal parts is this rectangle divided into? 	A 6	B 1	C 2
	D 1				D 9		
<b>3</b> How many equal parts is this rectangle divided into? 	A 3	B 7	C 5	<b>4</b> How many equal parts is this rectangle divided into? 	A 2	B 4	C 6
	D 1				D 5		
<b>5</b> How many equal parts is this rectangle divided into? 	A 6	B 4	C 2	<b>6</b> How many equal parts is this circle divided into? 	A 7	B 9	C 2
	D 9				D 3		
<b>7</b> How many equal parts is this circle divided into? 	A 5	B 2	C 1	<b>8</b> How many equal parts is this rectangle divided into? 	A 6	B 3	C 9
	D 3				D 4		