





## Fraction Equal Parts - Is This Equal Parts



1



Is this rectangle divided into equal parts?

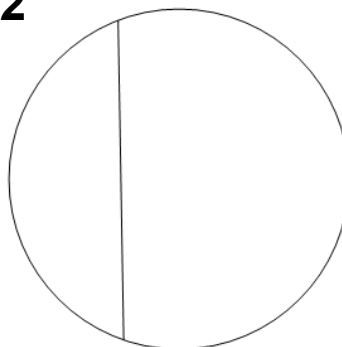
A

Yes

B

No

2



Is this circle divided into equal parts?


A

Yes

B

No

3



Is this rectangle divided into equal parts?

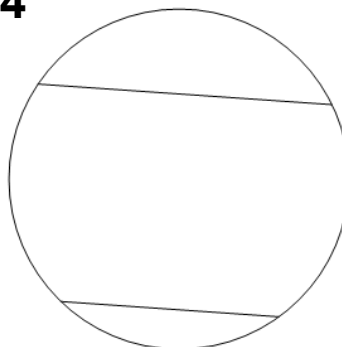
A

Yes

B

No

4



Is this circle divided into equal parts?

A

Yes

B

No

5



Is this rectangle divided into equal parts?

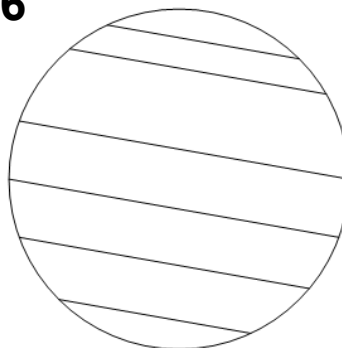
A

Yes

B

No

6



Is this circle divided into equal parts?

A

Yes

B

No

7



Is this rectangle divided into equal parts?

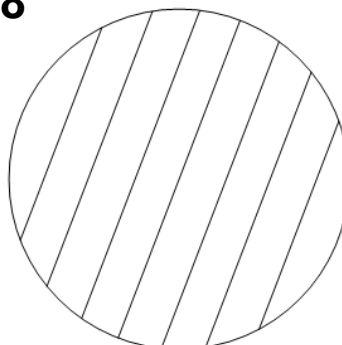
A

Yes

B

No

8



Is this circle divided into equal parts?

A

Yes

B

No