



Fraction Equal Parts - Is This X Equal Parts (Equal Only)

**1**

Is this rectangle divided into 6 equal parts?

A

Yes

B

No

2

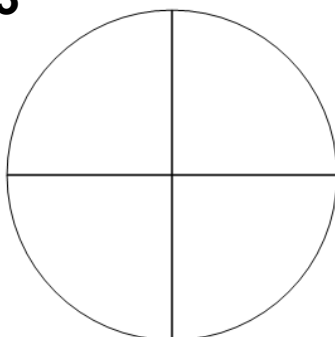
Is this rectangle divided into 6 equal parts?

A

Yes

B

No

3

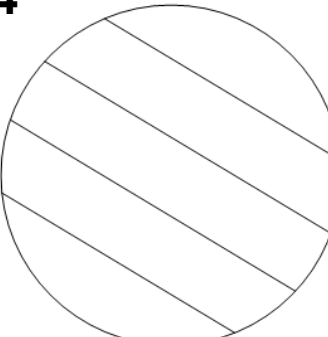
Is this circle divided into 4 equal parts?

A

Yes

B

No

4

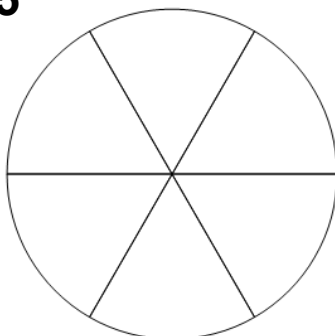
Is this circle divided into 5 equal parts?

A

Yes

B

No

5


Is this circle divided into 6 equal parts?

A

Yes

B

No

6

Is this rectangle divided into 3 equal parts?

A

Yes

B

No

7

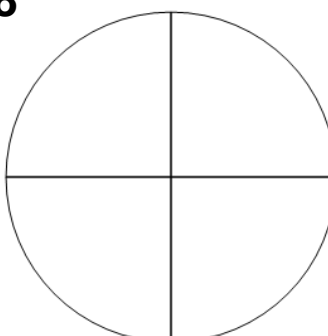
Is this rectangle divided into 4 equal parts?

A

Yes

B

No

8

Is this circle divided into 4 equal parts?

A

Yes

B

No