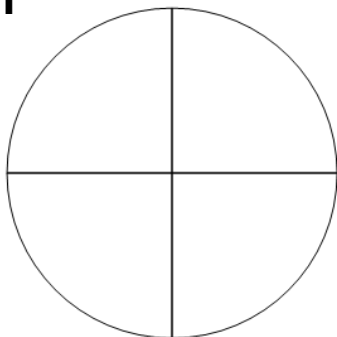




Fraction Equal Parts - Is This X Equal Parts (Number and Equal)

1

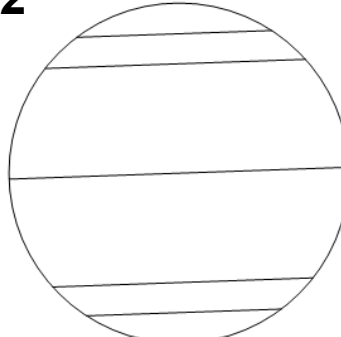
Is this circle divided into 8 equal parts?

A

Yes

B

No

2


Is this circle divided into 6 equal parts?

A

Yes

B

No

3

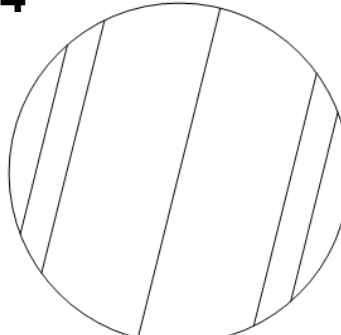
Is this rectangle divided into 6 equal parts?

A

Yes

B

No

4

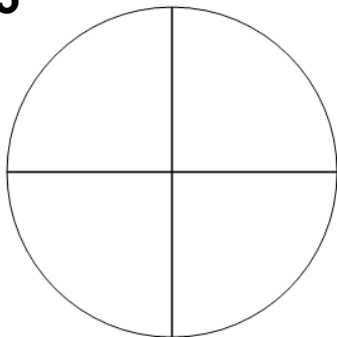
Is this circle divided into 6 equal parts?

A

Yes

B

No

5

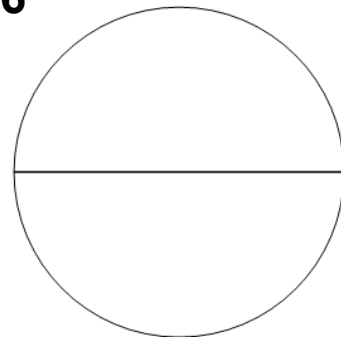
Is this circle divided into 4 equal parts?

A

Yes

B

No

6


Is this circle divided into 2 equal parts?

A

Yes

B

No

7

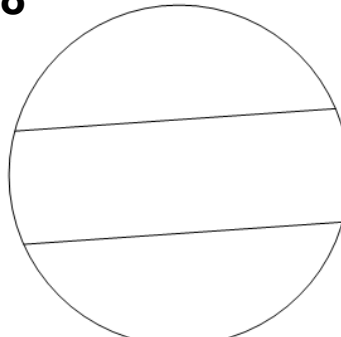
Is this rectangle divided into 3 equal parts?

A

Yes

B

No

8

Is this circle divided into 3 equal parts?

A

Yes

B

No