
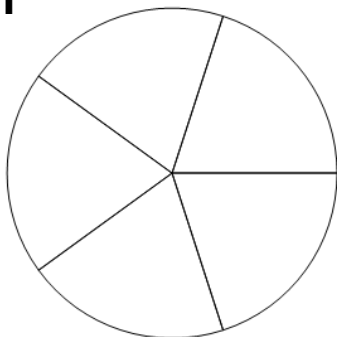




## Fraction Equal Parts - Is This X Equal Parts (Number Only)



1



Is this circle divided into 2 equal parts?

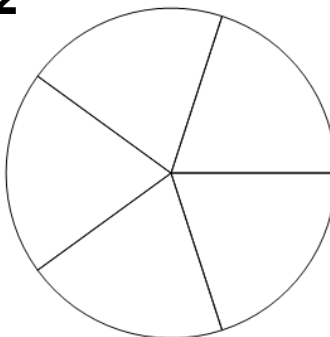
A

Yes

B

No

2



Is this circle divided into 5 equal parts?

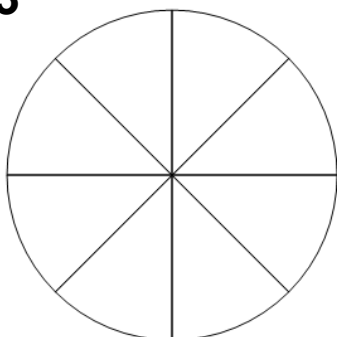
A

Yes

B

No

3



Is this circle divided into 6 equal parts?

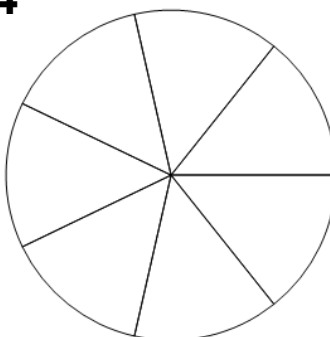
A

Yes

B

No

4



Is this circle divided into 7 equal parts?

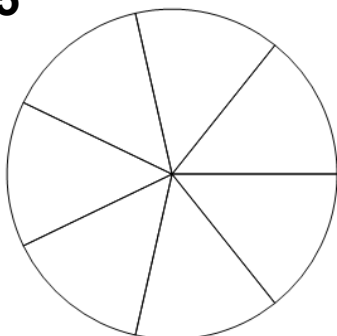
A

Yes

B

No

5



Is this circle divided into 7 equal parts?

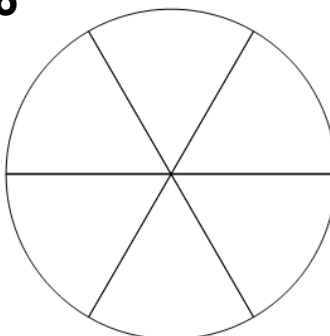
A

Yes

B

No

6



Is this circle divided into 6 equal parts?

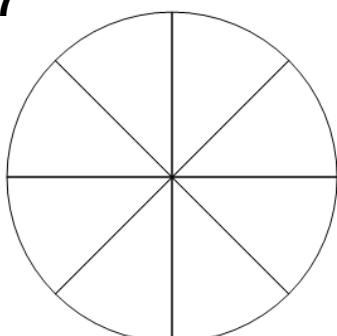
A

Yes

B

No

7



Is this circle divided into 5 equal parts?


A

Yes

B

No

8



Is this rectangle divided into 5 equal parts?

A

Yes

B

No