

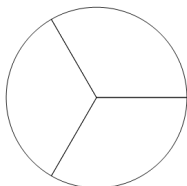


## Fraction Equal Parts - Which Has Equal Parts - Different Shape

**1**

Which of these shapes is divided into equal parts?

A

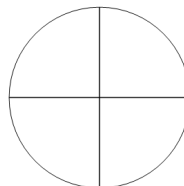


B

**2**

Which of these shapes is divided into equal parts?

A

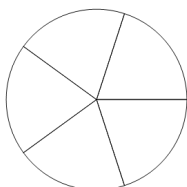


B

**3**

Which of these shapes is divided into equal parts?

A



B

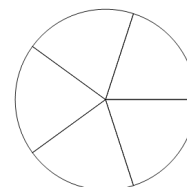
**4**

Which of these shapes is divided into equal parts?

A

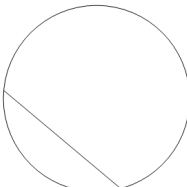


B

**5**

Which of these shapes is divided into equal parts?

A




B

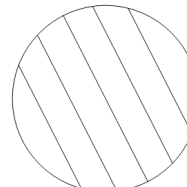
**6**

Which of these shapes is divided into equal parts?

A

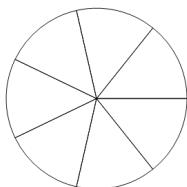


B

**7**

Which of these shapes is divided into equal parts?

A




B

**8**

Which of these shapes is divided into equal parts?

A



B

