




Fraction Equal Parts - Which Has Equal Parts - Same Shape


**1**

Which of these shapes is divided into equal parts?

A




B

**2**

Which of these shapes is divided into equal parts?

A

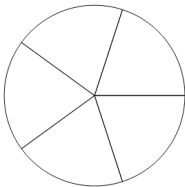


B

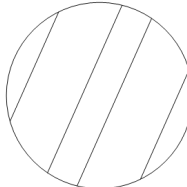
**3**

Which of these shapes is divided into equal parts?

A




B


**4**

Which of these shapes is divided into equal parts?

A

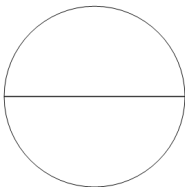


B

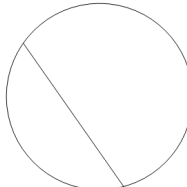
**5**

Which of these shapes is divided into equal parts?

A




B

**6**

Which of these shapes is divided into equal parts?

A

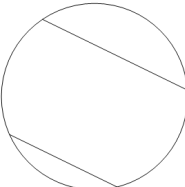


B

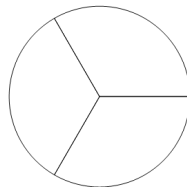
**7**

Which of these shapes is divided into equal parts?

A




B

**8**

Which of these shapes is divided into equal parts?

A



B

