




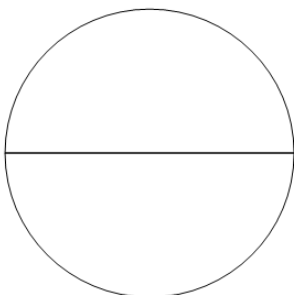
## Fraction Equal Parts - Which Has X Equal Parts - Same Shape

**1**

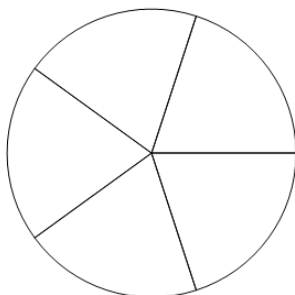
Which of these shapes is divided into 5 equal parts?

**5**

A




B

**3**


Which of these shapes is divided into 3 equal parts?

**3**

A




B

**2**

Which of these shapes is divided into 4 equal parts?

**4**

A



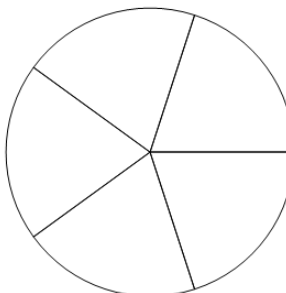
B

**4**

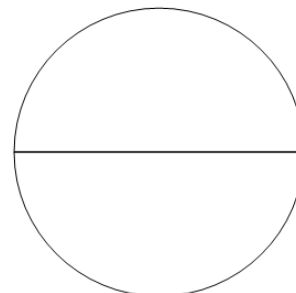
Which of these shapes is divided into 2 equal parts?

**2**

A



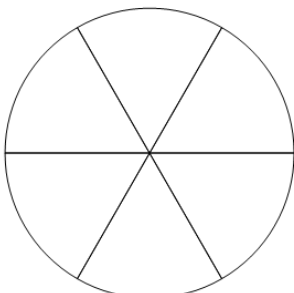
B

**5**

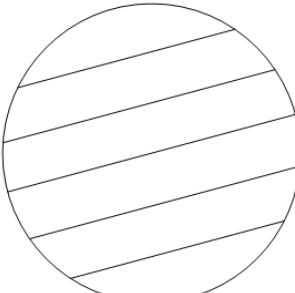
Which of these shapes is divided into 6 equal parts?

**6**

A



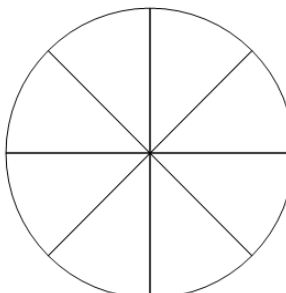
B

**6**

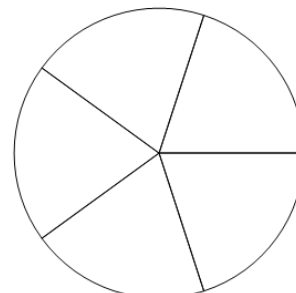
Which of these shapes is divided into 8 equal parts?

**8**

A



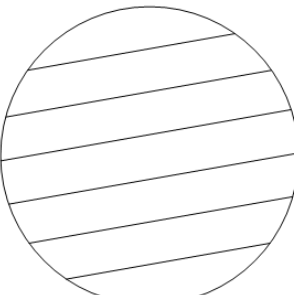
B

**7**

Which of these shapes is divided into 7 equal parts?

**7**

A



B

