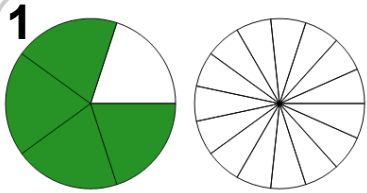


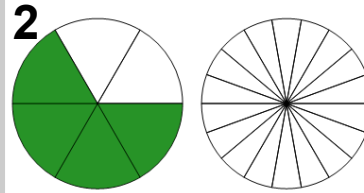
Fractions - Equivalent Fraction From Unshaded Image (Circle)



Find the equivalent fraction

$$\frac{4}{5} = \frac{?}{?}$$

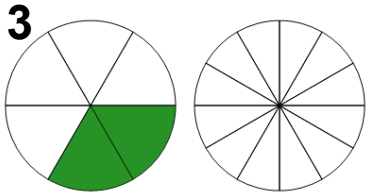
A	$\frac{12}{15}$	B	$\frac{20}{3}$
---	-----------------	---	----------------



Find the equivalent fraction

$$\frac{4}{6} = \frac{?}{?}$$

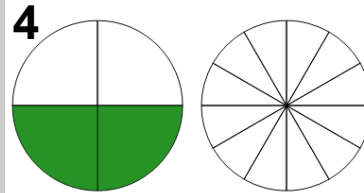
A	$\frac{12}{18}$	B	$\frac{12}{35}$
---	-----------------	---	-----------------



Find the equivalent fraction

$$\frac{2}{6} = \frac{?}{?}$$

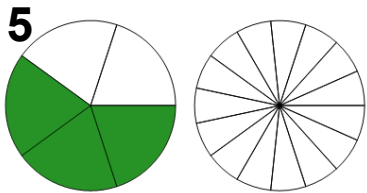
A	$\frac{9}{7}$	B	$\frac{4}{12}$
---	---------------	---	----------------



Find the equivalent fraction

$$\frac{2}{4} = \frac{?}{?}$$

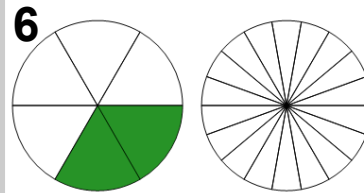
A	$\frac{6}{12}$	B	$\frac{13}{19}$
---	----------------	---	-----------------



Find the equivalent fraction

$$\frac{3}{5} = \frac{?}{?}$$

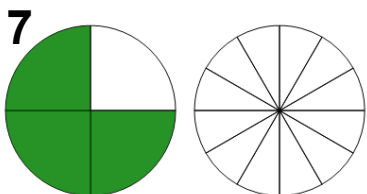
A	$\frac{9}{15}$	B	$\frac{16}{28}$
---	----------------	---	-----------------



Find the equivalent fraction

$$\frac{2}{6} = \frac{?}{?}$$

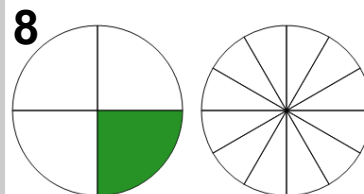
A	$\frac{5}{12}$	B	$\frac{6}{18}$
---	----------------	---	----------------



Find the equivalent fraction

$$\frac{3}{4} = \frac{?}{?}$$

A	$\frac{17}{16}$	B	$\frac{9}{12}$
---	-----------------	---	----------------



Find the equivalent fraction

$$\frac{1}{4} = \frac{?}{?}$$

A	$\frac{3}{11}$	B	$\frac{3}{12}$
---	----------------	---	----------------