



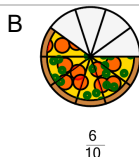
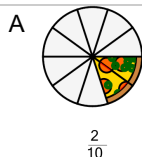


Fractions - Equivalent Image From Image (Pizza)



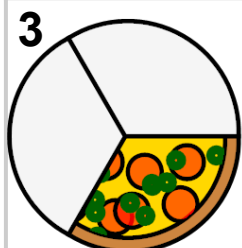
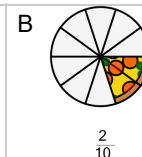
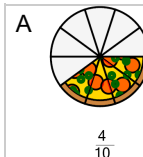
Which image is equivalent to this one?

$$\frac{3}{5} = \frac{?}{?}$$



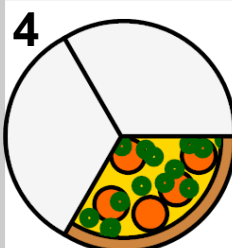
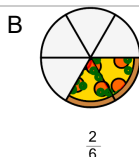
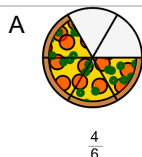
Which image is equivalent to this one?

$$\frac{2}{5} = \frac{?}{?}$$




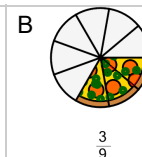
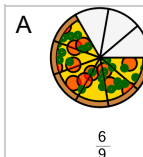
Which image is equivalent to this one?

$$\frac{1}{3} = \frac{?}{?}$$




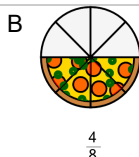
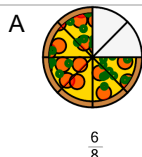
Which image is equivalent to this one?

$$\frac{1}{3} = \frac{?}{?}$$



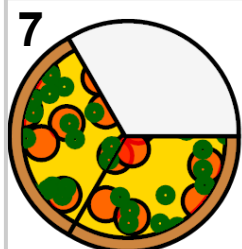
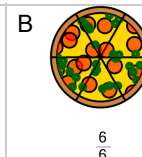
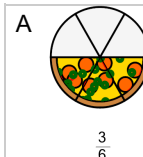
Which image is equivalent to this one?

$$\frac{3}{4} = \frac{?}{?}$$




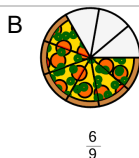
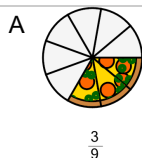
Which image is equivalent to this one?

$$\frac{1}{2} = \frac{?}{?}$$



Which image is equivalent to this one?

$$\frac{2}{3} = \frac{?}{?}$$



Which image is equivalent to this one?

$$\frac{1}{2} = \frac{?}{?}$$

