
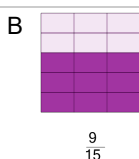
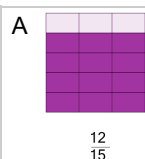


Fractions - Equivalent Image From Image (Rectangle)




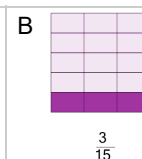
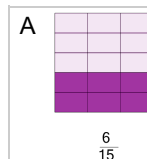
Which image is equivalent to this one?

$$\frac{3}{5} = \frac{?}{?}$$



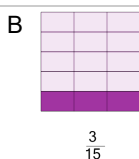
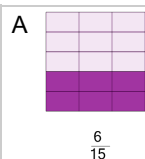
Which image is equivalent to this one?

$$\frac{2}{5} = \frac{?}{?}$$




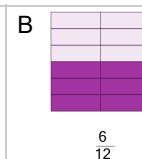
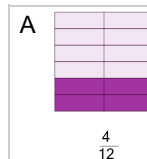
Which image is equivalent to this one?

$$\frac{1}{5} = \frac{?}{?}$$




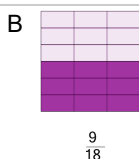
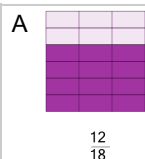
Which image is equivalent to this one?

$$\frac{3}{6} = \frac{?}{?}$$




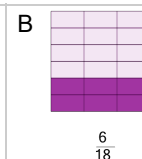
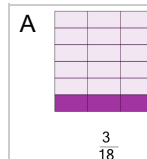
Which image is equivalent to this one?

$$\frac{4}{6} = \frac{?}{?}$$




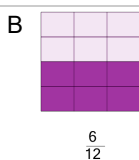
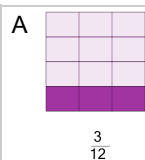
Which image is equivalent to this one?

$$\frac{2}{6} = \frac{?}{?}$$



Which image is equivalent to this one?

$$\frac{2}{4} = \frac{?}{?}$$



Which image is equivalent to this one?

$$\frac{1}{6} = \frac{?}{?}$$

