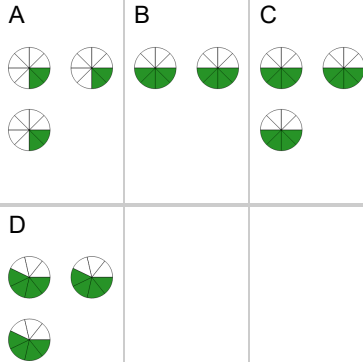




Fraction Multiplication - Simple by Whole Concept Intro - Equation to Picture

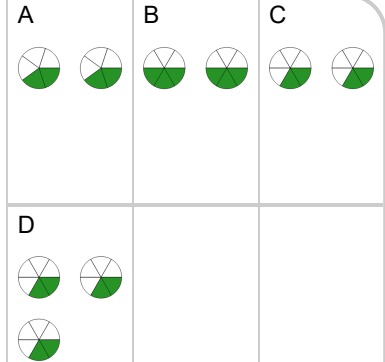
1 Which picture shows this fraction multiplication?

$$\frac{4}{8} \times 3$$



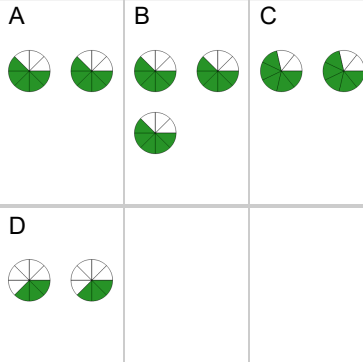
2 Which picture shows this fraction multiplication?

$$\frac{2}{6} \times 2$$



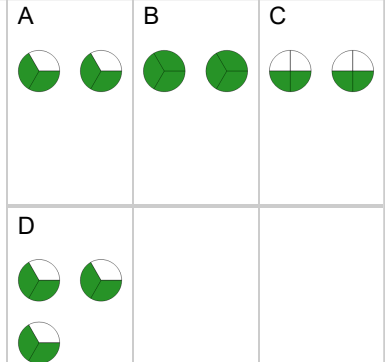
3 Which picture shows this fraction multiplication?

$$\frac{5}{8} \times 2$$



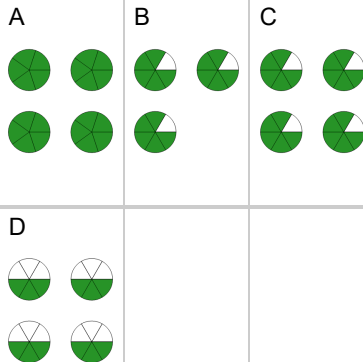
4 Which picture shows this fraction multiplication?

$$\frac{2}{3} \times 2$$



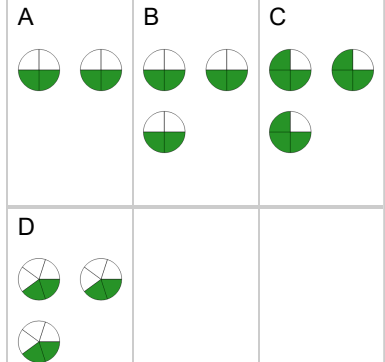
5 Which picture shows this fraction multiplication?

$$\frac{5}{6} \times 4$$



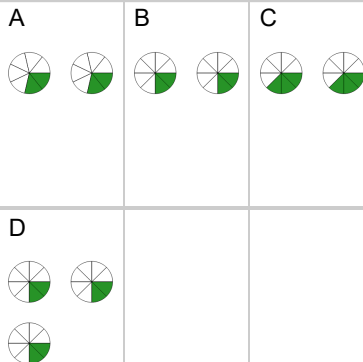
6 Which picture shows this fraction multiplication?

$$\frac{2}{4} \times 3$$



7 Which picture shows this fraction multiplication?

$$\frac{2}{8} \times 2$$



8 Which picture shows this fraction multiplication?

$$\frac{4}{8} \times 4$$

