




Fraction Multiplication - Simple by Whole Concept Intro - Equation to Picture

**1**

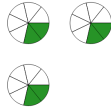
Which picture shows this fraction multiplication?

$$\frac{2}{7} \times 2$$

A



B



C



D

**2**

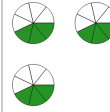
Which picture shows this fraction multiplication?

$$\frac{2}{7} \times 3$$

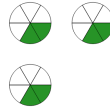
A



B



C



D

**3**

Which picture shows this fraction multiplication?

$$\frac{3}{7} \times 2$$

A



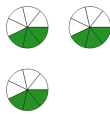
B



C



D

**4**

Which picture shows this fraction multiplication?

$$\frac{2}{5} \times 2$$

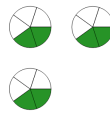
A



B



C



D

