

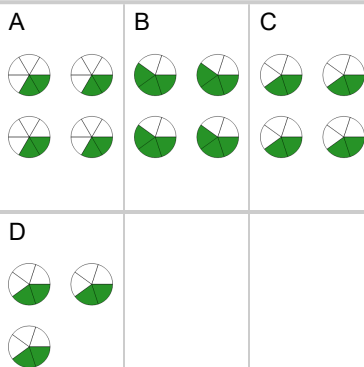


## Fraction Multiplication - Simple by Whole Concept Intro - Equation to Picture




1 Which picture shows this fraction multiplication?

$$\frac{2}{5} \times 4$$



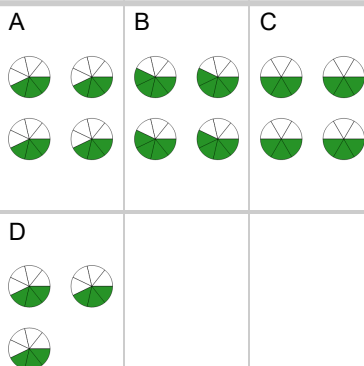
2 Which picture shows this fraction multiplication?

$$\frac{5}{8} \times 3$$



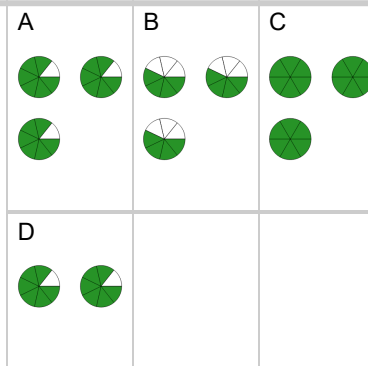
3 Which picture shows this fraction multiplication?

$$\frac{3}{7} \times 4$$



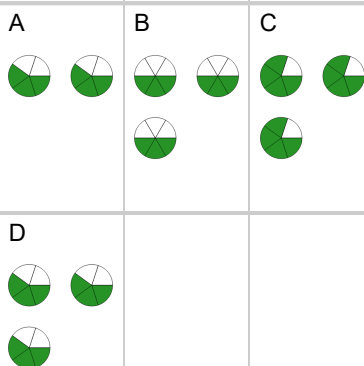
4 Which picture shows this fraction multiplication?

$$\frac{6}{7} \times 3$$



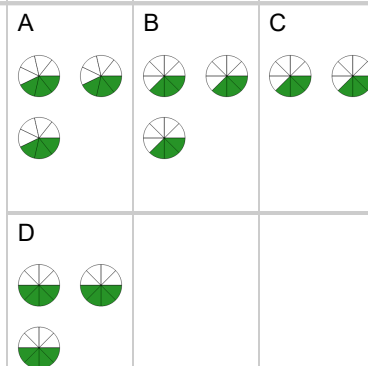
5 Which picture shows this fraction multiplication?

$$\frac{3}{5} \times 3$$




6 Which picture shows this fraction multiplication?

$$\frac{3}{8} \times 3$$



7 Which picture shows this fraction multiplication?

$$\frac{5}{7} \times 4$$



8 Which picture shows this fraction multiplication?

$$\frac{4}{5} \times 3$$

