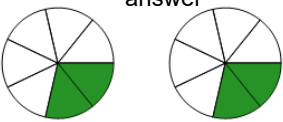
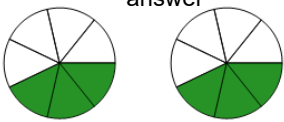
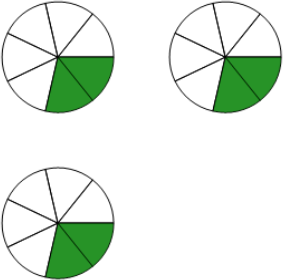
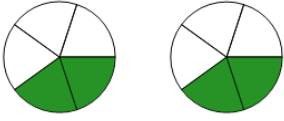


Fraction Multiplication - Simple by Whole Concept Intro - Picture to Answer - Don't

Simplify

1 What is the result of multiplying $\frac{2}{7}$ by 2? Don't simplify the answer 	A $\frac{2}{14}$	B 4	C $\frac{4}{7}$	2 What is the result of multiplying $\frac{3}{7}$ by 2? Don't simplify the answer 	A $\frac{3}{14}$	B $\frac{5}{8}$	C $\frac{6}{7}$
	D $\frac{4}{8}$				D 5	E $\frac{5}{7}$	
3 What is the result of multiplying $\frac{2}{7}$ by 3? Don't simplify the answer 	A 5	B $\frac{6}{7}$	C $\frac{5}{8}$	4 What is the result of multiplying $\frac{2}{5}$ by 2? Don't simplify the answer 	A $\frac{4}{6}$	B $\frac{2}{10}$	C 4
	D $\frac{2}{21}$	E $\frac{5}{7}$			D $\frac{4}{5}$		