
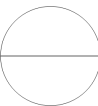
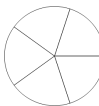
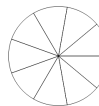
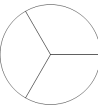




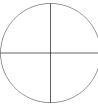
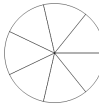
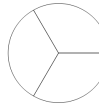
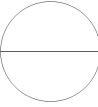
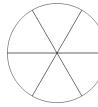
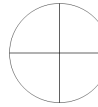
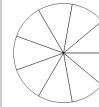
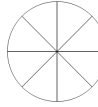

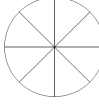
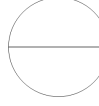
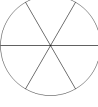






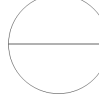
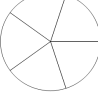

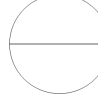





Fraction Naming - Denominator Name to Empty Image



1 Which image shows a whole split into thirds? thirds	A 	B 	C 
	D 		
2 Which image shows a whole split into halves? halves	A 	B 	C 
	D 		
3 Which image shows a whole split into sevenths? sevenths	A 	B 	C 
	D 		
4 Which image shows a whole split into sixths? sixths	A 	B 	C 
	D 		
5 Which image shows a whole split into eighths? eighths	A 	B 	C 
	D 		
6 Which image shows a whole split into quarters? quarters	A 	B 	C 
	D 		
7 Which image shows a whole split into fifths? fifths	A 	B 	C 
	D 		
8 Which image shows a whole split into fourths? fourths	A 	B 	C 
	D 