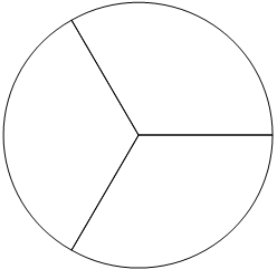


Fraction Naming - Empty Image to Denominator Name

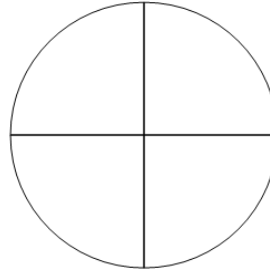
1 What is the name for the 3 parts this whole is split into?



A thirds B sixths

C sevenths D ninths

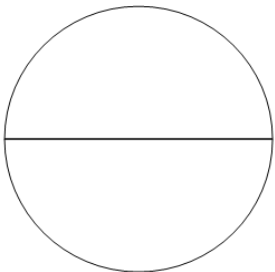
2 What is the name for the 4 parts this whole is split into?



A fifths B ninths

C halves D quarters

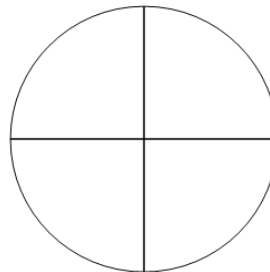
3 What is the name for the 2 parts this whole is split into?



A thirds B halves

C sevenths D fourths

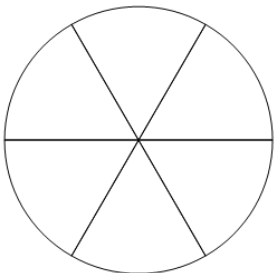
4 What is the name for the 4 parts this whole is split into?



A sixths B eighths

C quarters D fifths

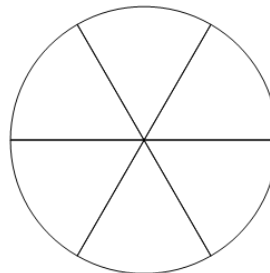
5 What is the name for the 6 parts this whole is split into?



A fourths B sixths

C halves D ninths

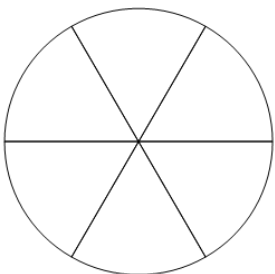
6 What is the name for the 6 parts this whole is split into?



A thirds B halves

C eighths D sixths

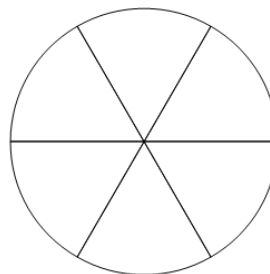
7 What is the name for the 6 parts this whole is split into?



A eighths B ninths

C thirds D sixths

8 What is the name for the 6 parts this whole is split into?



A sixths B quarters

C ninths D halves