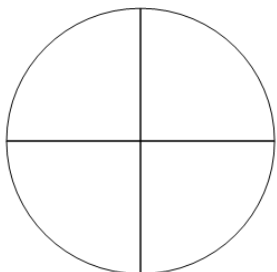




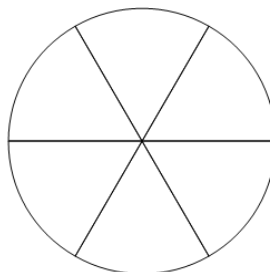
Fraction Naming - Empty Image to Denominator Name

1 What is the name for the 4 parts this whole is split into?



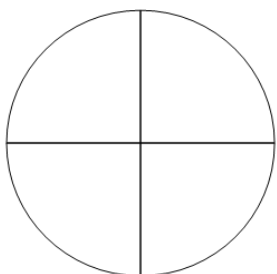
- | | | | |
|---|----------|---|----------|
| A | quarters | B | eighths |
| C | fifths | D | sevenths |
| | | | |

2 What is the name for the 6 parts this whole is split into?



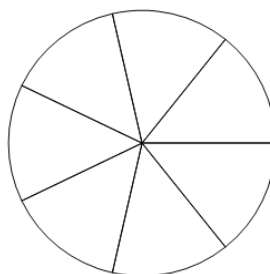
- | | | | |
|---|--------|---|---------|
| A | sixths | B | fourths |
| C | halves | D | ninths |
| | | | |

3 What is the name for the 4 parts this whole is split into?



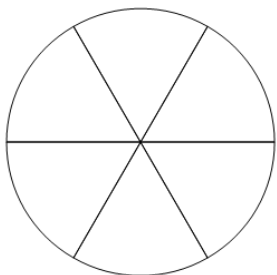
- | | | | |
|---|---------|---|--------|
| A | thirds | B | halves |
| C | fourths | D | ninths |
| | | | |

4 What is the name for the 7 parts this whole is split into?



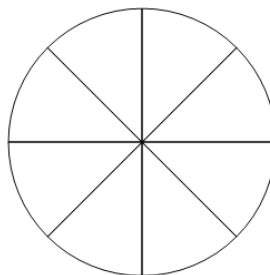
- | | | | |
|---|----------|---|--------|
| A | halves | B | fifths |
| C | sevenths | D | thirds |
| | | | |

5 What is the name for the 6 parts this whole is split into?



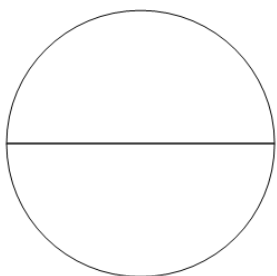
- | | | | |
|---|---------|---|---------|
| A | ninths | B | eighths |
| C | fourths | D | sixths |
| | | | |

6 What is the name for the 8 parts this whole is split into?



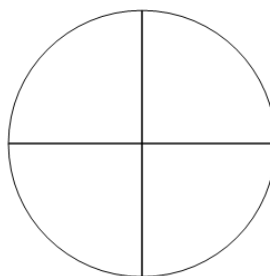
- | | | | |
|---|---------|---|--------|
| A | sixths | B | fifths |
| C | eighths | D | halves |
| | | | |

7 What is the name for the 2 parts this whole is split into?



- | | | | |
|---|--------|---|----------|
| A | thirds | B | fifths |
| C | halves | D | sevenths |
| | | | |

8 What is the name for the 4 parts this whole is split into?



- | | | | |
|---|---------|---|----------|
| A | sixths | B | halves |
| C | fourths | D | sevenths |
| | | | |