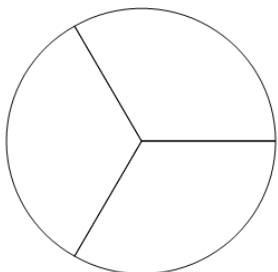




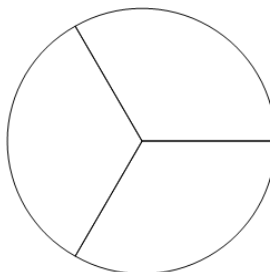
Fraction Naming - Empty Image to Denominator Number

1 How many parts is this whole split into?



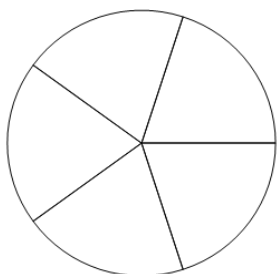
A	B	C
3	5	9
D		
2		

2 How many parts is this whole split into?



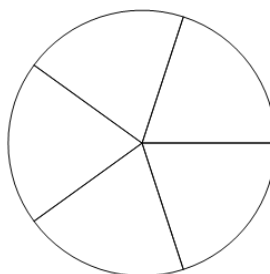
A	B	C
2	3	9
D		
7		

3 How many parts is this whole split into?



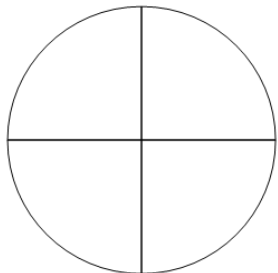
A	B	C
6	7	4
D		
5		

4 How many parts is this whole split into?



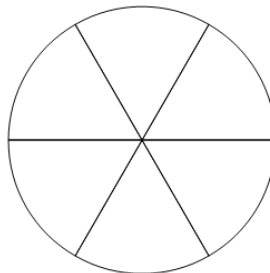
A	B	C
7	6	5
D		
9		

5 How many parts is this whole split into?



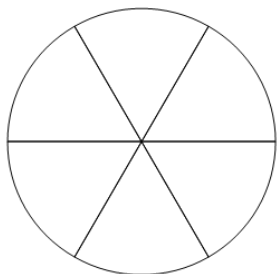
A	B	C
4	6	9
D		
7		

6 How many parts is this whole split into?



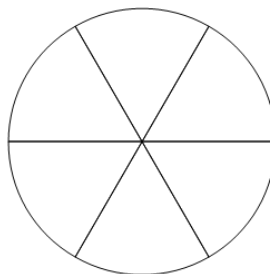
A	B	C
9	6	2
D		
4		

7 How many parts is this whole split into?



A	B	C
9	3	6
D		
4		

8 How many parts is this whole split into?



A	B	C
6	3	2
D		
9		