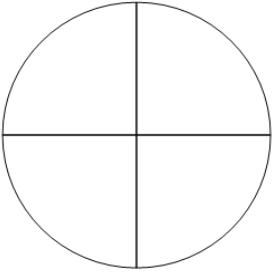
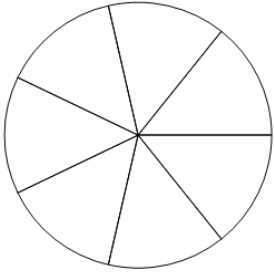
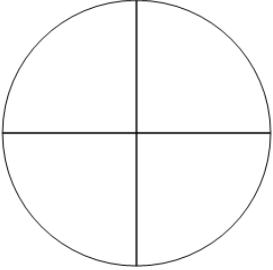
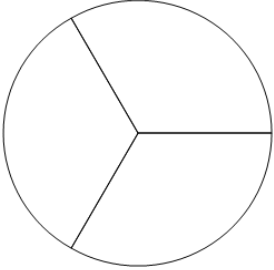
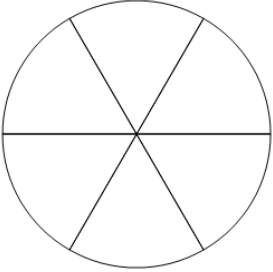
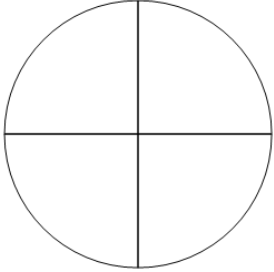
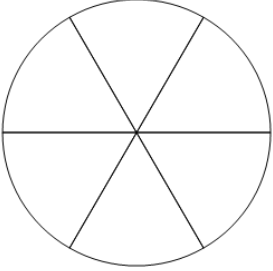
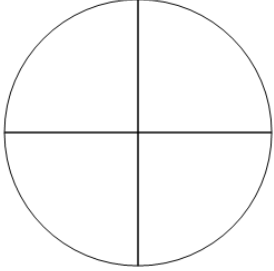




Fraction Naming - Empty Image to Denominator Number

1 How many parts is this whole split into? 	A 3	B 7	C 4	2 How many parts is this whole split into? 	A 4	B 7	C 5
	D 8				D 9		
3 How many parts is this whole split into? 	A 9	B 2	C 4	4 How many parts is this whole split into? 	A 6	B 2	C 3
	D 6				D 8		
5 How many parts is this whole split into? 	A 4	B 9	C 8	6 How many parts is this whole split into? 	A 7	B 5	C 4
	D 6				D 3		
7 How many parts is this whole split into? 	A 4	B 9	C 6	8 How many parts is this whole split into? 	A 8	B 7	C 3
	D 8				D 4		