




Fraction Naming - Fraction Image to Denominator Number

1

How many parts is this fraction split into?



A

4

B

6

C

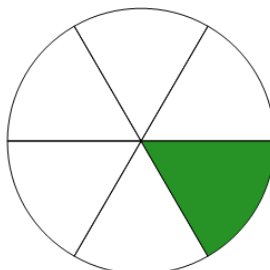
2

D

3

2

How many parts is this fraction split into?



A

3

B

6

C

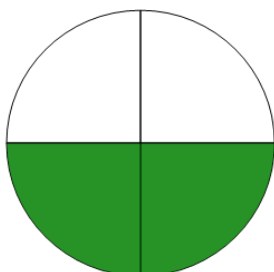
4

D

9

3

How many parts is this fraction split into?



A

9

B

7

C

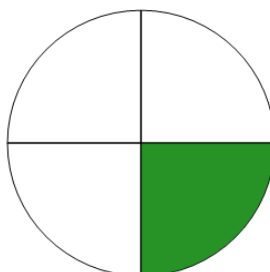
4

D

8

4

How many parts is this fraction split into?



A

4

B

8

C


2

D

7

5

How many parts is this fraction split into?



A

4

B

9

C

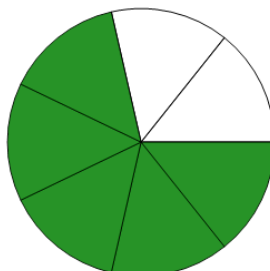
2

D

7

6

How many parts is this fraction split into?



A

7

B

3

C

5

D

2

7

How many parts is this fraction split into?



A

4

B

6

C

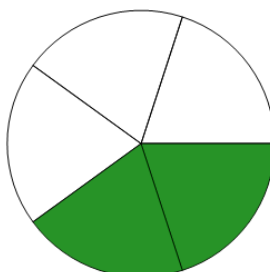
7

D

3

8

How many parts is this fraction split into?



A

5

B

6

C

9

D

8