
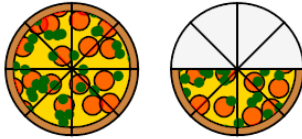
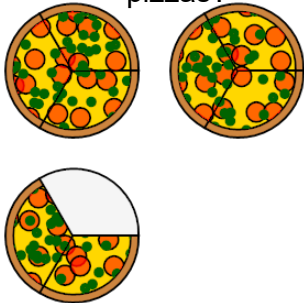
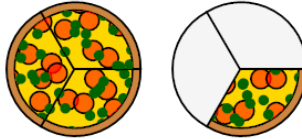
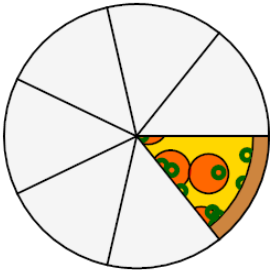
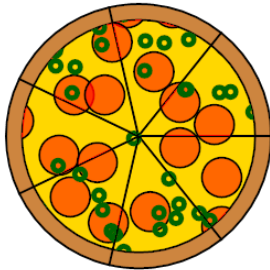
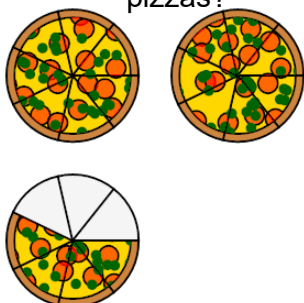
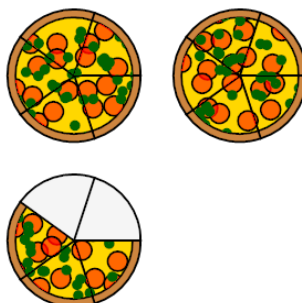




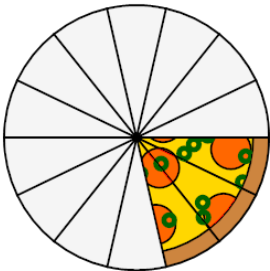
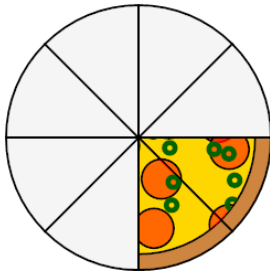

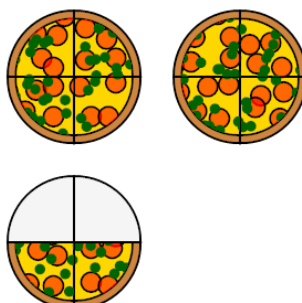


Fraction Concept Intro - Improper Numerator to Picture, Mixed Fraction

<p>1 Which image shows the correct pizzas?</p> <p>A </p>	<p>12 total slices</p> <p>B </p>	<p>2 Which image shows the correct pizzas?</p> <p>A </p>	<p>4 total slices</p> <p>B </p>
<p>3 Which image shows the correct pizzas?</p> <p>A </p>	<p>1 total slices</p> <p>B </p>	<p>4 Which image shows the correct pizzas?</p> <p>A </p>	<p>13 total slices</p> <p>B </p>
<p>5 Which image shows the correct pizzas?</p> <p>A </p>	<p>7 total slices</p> <p>B </p>	<p>6 Which image shows the correct pizzas?</p> <p>A </p>	<p>5 total slices</p> <p>B </p>
<p>7 Which image shows the correct pizzas?</p> <p>A </p>	<p>2 total slices</p> <p>B </p>	<p>8 Which image shows the correct pizzas?</p> <p>A </p>	<p>10 total slices</p> <p>B </p>