



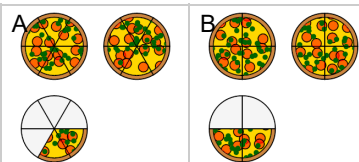
Fraction Concept Intro - Fraction to Picture, Mixed Fraction



1

$$2\frac{2}{6}$$

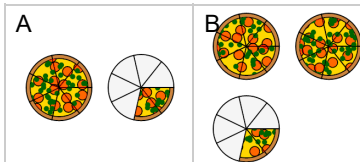
Which image shows this many pizzas?



2

$$1\frac{2}{7}$$

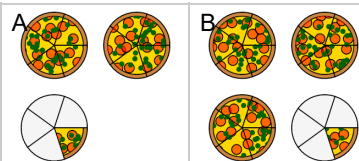
Which image shows this many pizzas?



3

$$2\frac{1}{5}$$

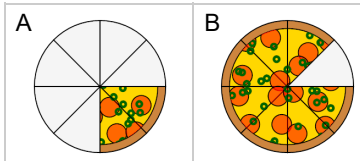
Which image shows this many pizzas?



4

$$2\frac{1}{8}$$

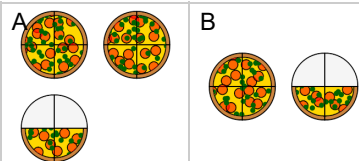
Which image shows this much of a pizza?



5

$$1\frac{2}{4}$$

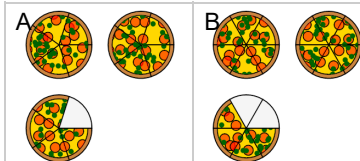
Which image shows this many pizzas?



6

$$2\frac{4}{5}$$

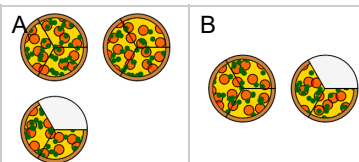
Which image shows this many pizzas?



7

$$1\frac{2}{3}$$

Which image shows this many pizzas?



8

$$2\frac{2}{4}$$

Which image shows this many pizzas?

