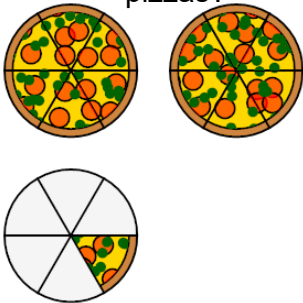
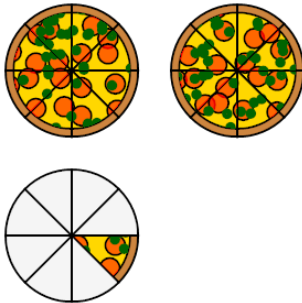

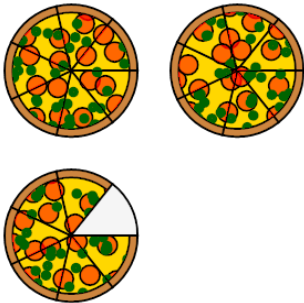


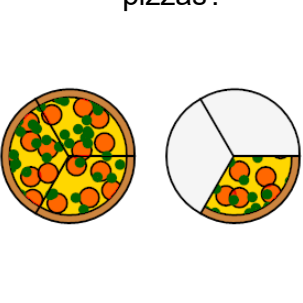
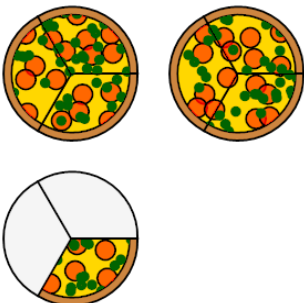
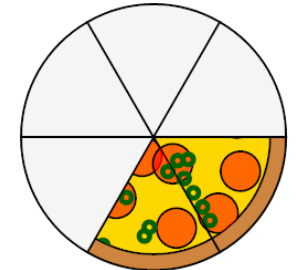
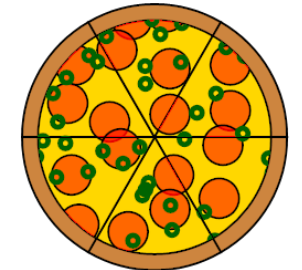
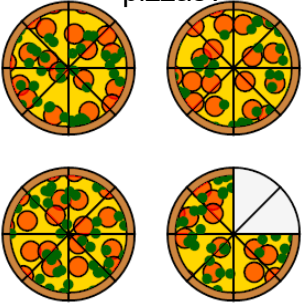
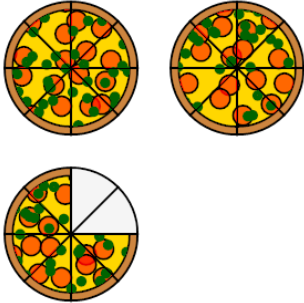
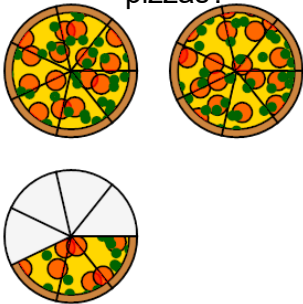
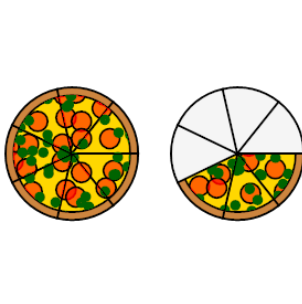
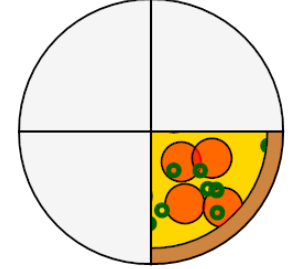




## Fraction Concept Intro - Description to Picture, Mixed Fraction



<b>1</b> Which image shows the correct pizzas? A 	2 full pizzas and 1 slices out of 6 B 	<b>2</b> Which image shows the correct pizzas? A 	2 full pizzas and 6 slices out of 7 B 
<b>3</b> Which image shows the correct pizzas? A 	2 full pizzas and 7 slices out of 8 B 	<b>4</b> Which image shows the correct pizzas? A 	1 full pizza and 1 slices out of 3 B 
<b>5</b> Which image shows the correct pizza? A 	2 slices out of 6 in a full pizza B 	<b>6</b> Which image shows the correct pizzas? A 	2 full pizzas and 6 slices out of 8 B 
<b>7</b> Which image shows the correct pizzas? A 	1 full pizza and 3 slices out of 7 B 	<b>8</b> Which image shows the correct pizza? A 	3 slices out of 4 in a full pizza B 