




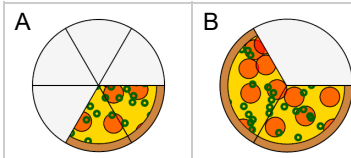
## Fraction Concept Intro - Fraction to Picture, Simple Fraction



1

 $\frac{2}{6}$ 

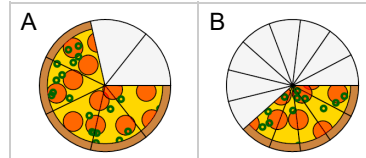
Which image shows this much of a pizza?



2

 $\frac{5}{7}$ 

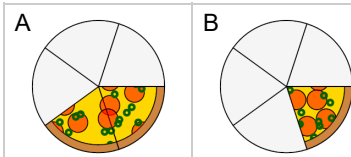
Which image shows this much of a pizza?



3

 $\frac{1}{5}$ 

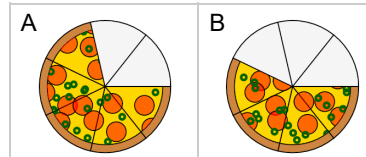
Which image shows this much of a pizza?



4

 $\frac{4}{7}$ 

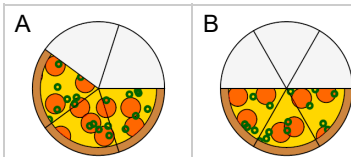
Which image shows this much of a pizza?



5

 $\frac{3}{5}$ 

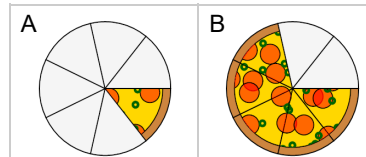
Which image shows this much of a pizza?



6

 $\frac{1}{7}$ 

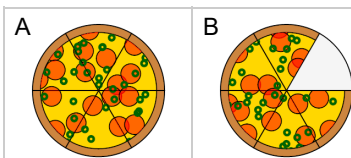
Which image shows this much of a pizza?



7

 $\frac{5}{6}$ 

Which image shows this much of a pizza?



8

 $\frac{6}{7}$ 

Which image shows this much of a pizza?

