

## Fraction Strips - Two Strips, One Shaded to One Strip Shaded


1




Which fraction strip of quarters is the same length as  $\frac{1}{2}$ ?



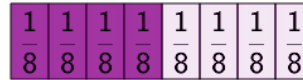
A



B




2



Which fraction strip of quarters is the same length as  $\frac{4}{8}$ ?



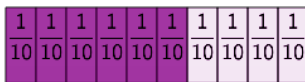
A



B



3




Which fraction strip of fifths is the same length as  $\frac{6}{10}$ ?



A



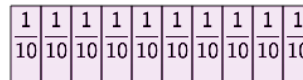
B



4



Which fraction strip of tenths is the same length as  $\frac{1}{5}$ ?




A



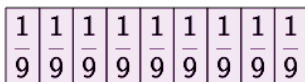
B



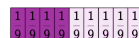
5




Which fraction strip of ninths is the same length as  $\frac{1}{3}$ ?



A



B




6



Which fraction strip of twelfths is the same length as  $\frac{3}{4}$ ?



A



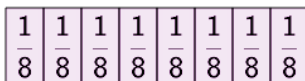
B




7




Which fraction strip of eighths is the same length as  $\frac{1}{2}$ ?




A



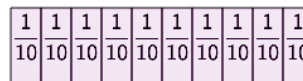
B



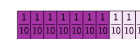
8



Which fraction strip of tenths is the same length as  $\frac{3}{5}$ ?



A



B

