

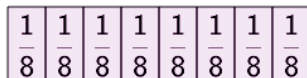




Fraction Strips - Two Strips, One Shaded to Ratio

**1**

How many eighths are in each fourth?




A

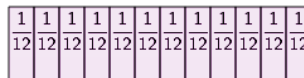
2

B

1

2

How many twelfths are in each fourth?



A


3

B

2

3

How many quarters are in each half?



A

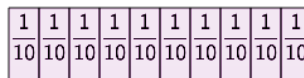
2

B

1

4

How many tenths are in each fifth?




A

3

B

2

5

How many twelfths are in each quarter?



A

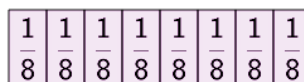
2

B

3

6

How many eighths are in each half?



A

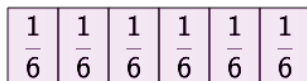
4

B

3

7

How many sixths are in each half?




A

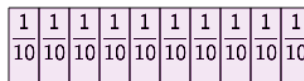
3

B

4

8

How many tenths are in each fifth?



A

2

B

3