





Fraction Strips - Two Strips to Ordering



1




Use the fraction strips to put $\frac{1}{2}$ and $\frac{4}{6}$ into increasing order



A $\frac{1}{2}$ $\frac{4}{6}$ B $\frac{4}{6}$ $\frac{1}{2}$

2




Use the fraction strips to put $\frac{2}{9}$ and $\frac{1}{3}$ into increasing order

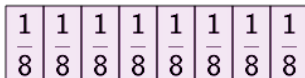


A $\frac{2}{9}$ $\frac{1}{3}$ B $\frac{1}{3}$ $\frac{2}{9}$

3

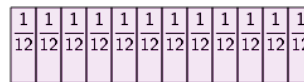


Use the fraction strips to put $\frac{1}{2}$ and $\frac{3}{8}$ into increasing order

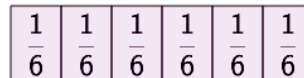


A $\frac{1}{2}$ $\frac{3}{8}$ B $\frac{3}{8}$ $\frac{1}{2}$

4

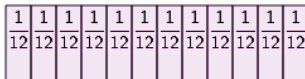


Use the fraction strips to put $\frac{1}{12}$ and $\frac{1}{6}$ into increasing order




A $\frac{1}{6}$ $\frac{1}{12}$ B $\frac{1}{12}$ $\frac{1}{6}$

5

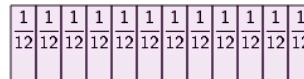


Use the fraction strips to put $\frac{5}{12}$ and $\frac{1}{3}$ into increasing order




A $\frac{5}{12}$ $\frac{1}{3}$ B $\frac{1}{3}$ $\frac{5}{12}$

6

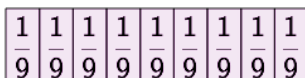


Use the fraction strips to put $\frac{3}{12}$ and $\frac{1}{3}$ into increasing order




A $\frac{1}{3}$ $\frac{3}{12}$ B $\frac{3}{12}$ $\frac{1}{3}$

7




Use the fraction strips to put $\frac{5}{9}$ and $\frac{2}{3}$ into increasing order



A $\frac{2}{3}$ $\frac{5}{9}$ B $\frac{5}{9}$ $\frac{2}{3}$

8



Use the fraction strips to put $\frac{1}{4}$ and $\frac{1}{2}$ into increasing order



A $\frac{1}{2}$ $\frac{1}{4}$ B $\frac{1}{4}$ $\frac{1}{2}$