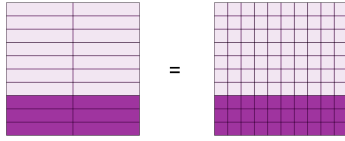


Fraction to Decimals - To Hundredths Decimal (filled Placeholder) - Concept

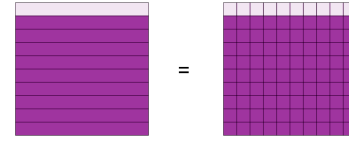
Intro

1 What decimal in hundredths is equivalent to $6/20$?



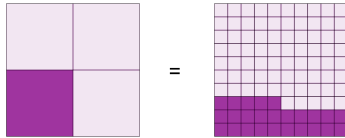
- | | | | |
|------|------|------|------|
| A | B | C | D |
| 0.30 | 0.61 | 0.86 | 0.21 |

2 What decimal in hundredths is equivalent to $9/10$?



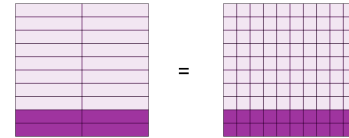
- | | | | |
|------|------|------|------|
| A | B | C | D |
| 0.62 | 0.12 | 0.05 | 0.90 |

3 What decimal in hundredths is equivalent to $1/4$?



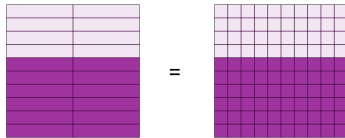
- | | | | |
|------|------|------|------|
| A | B | C | D |
| 0.21 | 0.02 | 0.25 | 0.50 |

4 What decimal in hundredths is equivalent to $4/20$?



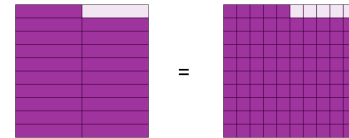
- | | | | |
|------|------|------|------|
| A | B | C | D |
| 0.28 | 0.20 | 0.22 | 0.77 |

5 What decimal in hundredths is equivalent to $12/20$?



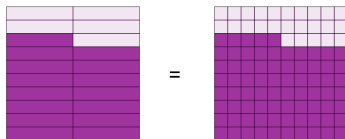
- | | | | |
|------|------|------|------|
| A | B | C | D |
| 0.01 | 0.60 | 0.99 | 0.75 |

6 What decimal in hundredths is equivalent to $19/20$?



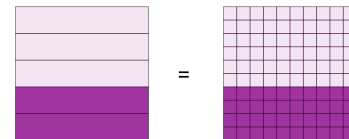
- | | | | |
|------|------|------|------|
| A | B | C | D |
| 0.34 | 0.81 | 0.38 | 0.95 |

7 What decimal in hundredths is equivalent to $15/20$?



- | | | | |
|------|------|------|------|
| A | B | C | D |
| 0.61 | 0.86 | 0.46 | 0.75 |

8 What decimal in hundredths is equivalent to $2/5$?



- | | | | |
|------|------|------|------|
| A | B | C | D |
| 0.38 | 0.89 | 0.14 | 0.40 |