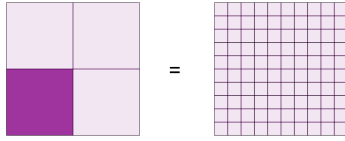


Fraction to Decimals - To Hundredths Fraction (with Placeholder) - Concept

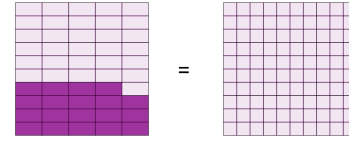
Intro

1 What fraction in hundredths is equivalent to $\frac{1}{4}$?



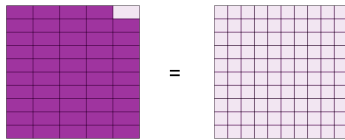
- A $\frac{25}{100}$ B $\frac{43}{100}$ C $\frac{91}{100}$ D $\frac{24}{100}$

2 What fraction in hundredths is equivalent to $\frac{19}{50}$?



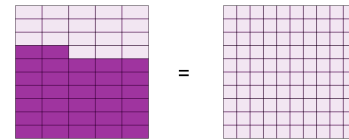
- A $\frac{18}{100}$ B $\frac{93}{100}$ C $\frac{14}{100}$ D $\frac{38}{100}$

3 What fraction in hundredths is equivalent to $\frac{49}{50}$?



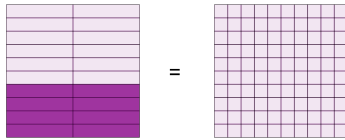
- A $\frac{57}{100}$ B $\frac{88}{100}$ C $\frac{56}{100}$ D $\frac{98}{100}$

4 What fraction in hundredths is equivalent to $\frac{32}{50}$?



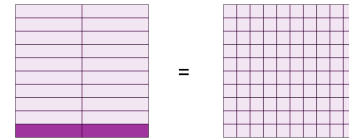
- A $\frac{64}{100}$ B $\frac{30}{100}$ C $\frac{94}{100}$ D $\frac{2}{100}$

5 What fraction in hundredths is equivalent to $\frac{8}{20}$?



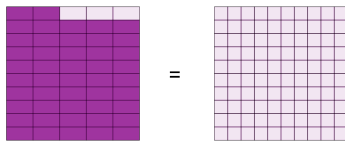
- A $\frac{46}{100}$ B $\frac{52}{100}$ C $\frac{56}{100}$ D $\frac{40}{100}$

6 What fraction in hundredths is equivalent to $\frac{2}{20}$?



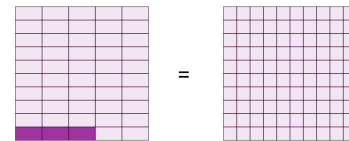
- A $\frac{23}{100}$ B $\frac{35}{100}$ C $\frac{55}{100}$ D $\frac{10}{100}$

7 What fraction in hundredths is equivalent to $\frac{47}{50}$?



- A $\frac{30}{100}$ B $\frac{35}{100}$ C $\frac{94}{100}$ D $\frac{26}{100}$

8 What fraction in hundredths is equivalent to $\frac{3}{50}$?



- A $\frac{8}{100}$ B $\frac{58}{100}$ C $\frac{46}{100}$ D $\frac{6}{100}$