

Function Domain/Range Definition - Number Line to Words (Without Union)

1

What range does this number line show?



A All real numbers greater than or equal to -4

B All real numbers greater than -4

3

What range does this number line show?



A All real numbers less than or equal to 5

B All real numbers less than 5

5

What domain does this number line show?

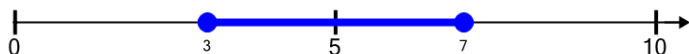


A All real numbers greater than or equal to 1

B All real numbers

7

What domain does this number line show?



A All real numbers greater than or equal to 3 and less than or equal to 7

B All real numbers greater than or equal to 3 and less than 7

2

What domain does this number line show?

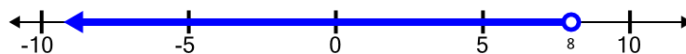


A All real numbers greater than 1 and less than 7

B All real numbers less than 7

4

What range does this number line show?



A All real numbers less than 8

B All real numbers less than or equal to 8

6

What range does this number line show?

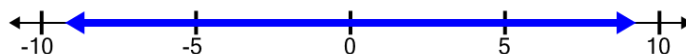


A All real numbers greater than or equal to -3 and less than 6

B All real numbers less than 6

8

What domain does this number line show?



A All real numbers greater than or equal to -5

B All real numbers