



## Function Domain/Range Definition - Words to Number Line (With Union)

1

What number line shows this domain?

All real numbers greater than -2 and less than or equal to 6  
OR greater than 9



2

What number line shows this range?



All real numbers greater than -2 and less than or equal to 7  
OR greater than or equal to 11



3

What number line shows this range?

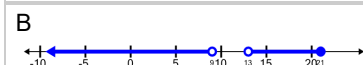
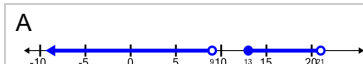
All real numbers greater than -3 and less than 9 OR greater than or equal to 12



4

What number line shows this domain?

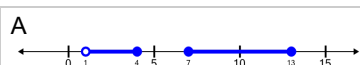
All real numbers less than 9  
OR greater than 13 and less than or equal to 21



5

What number line shows this domain?

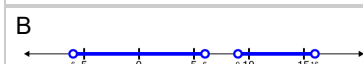
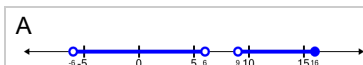
All real numbers greater than 1 and less than or equal to 4 OR greater than or equal to 7 and less than or equal to 13



6

What number line shows this domain?

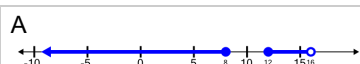
All real numbers greater than -6 and less than 6 OR greater than 9 and less than or equal to 16



7

What number line shows this range?

All real numbers less than or equal to 8 OR greater than or equal to 12 and less than 16



8

What number line shows this domain?

All real numbers greater than 0 and less than 7 OR greater than 11 and less than or equal to 17

