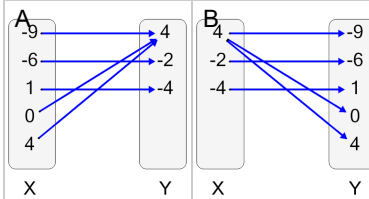


1

Which relation has this range?

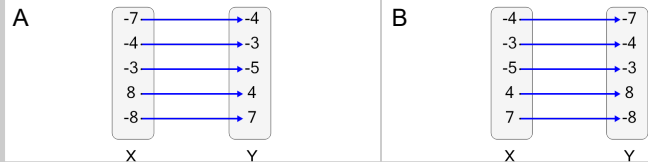
$$R : \{4, -2, -4\}$$



2

Which relation has this range?

$$R : \{-4, -3, -5, 4, 7\}$$



3

Which relation has this range?

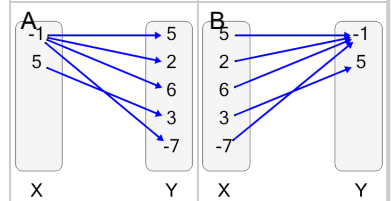
$$R : \{8, 6, -3, -9, -1\}$$



4

Which relation has this range?


$$R : \{-1, 5\}$$



5

Which relation has this range?

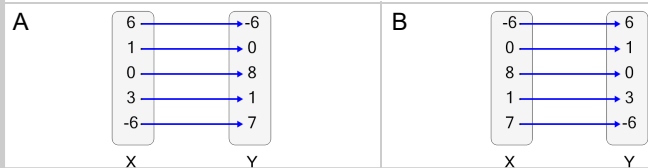
$$R : \{6, -6, -8, 8, -1\}$$



6

Which relation has this range?

$$R : \{-6, 0, 8, 1, 7\}$$



7

Which relation has this range?

$$R : \{1, 5, -9, -3\}$$



8

Which relation has this range?

$$R : \{-2, -1\}$$

