
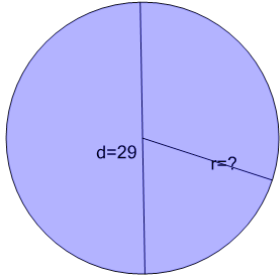


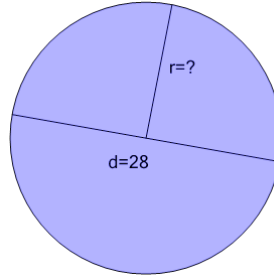


Circles - Find Radius from Diameter

**1**

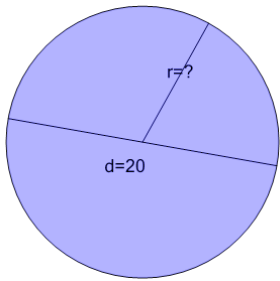
Find the radius of the circle that has the given diameter

A	13.5	B	15.5
C	14.5	D	12.5

2

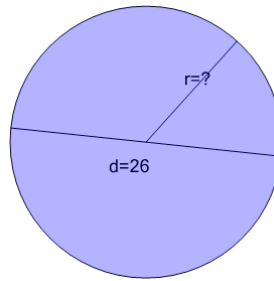
Find the radius of the circle that has the given diameter

A	15	B	12
C	14	D	13

3

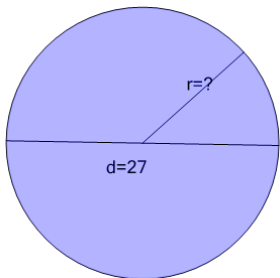
Find the radius of the circle that has the given diameter

A	12	B	9
C	10	D	11
E	8		

4

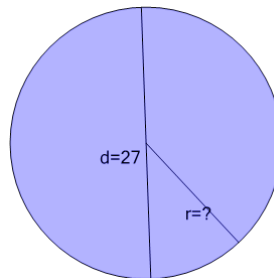
Find the radius of the circle that has the given diameter

A	11	B	14
C	15	D	13
E	12		

5

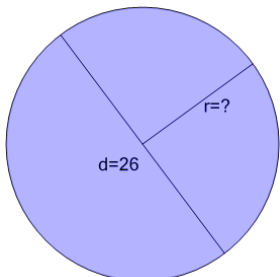
Find the radius of the circle that has the given diameter

A	15.5	B	11.5
C	12.5	D	14.5
E	13.5		

6

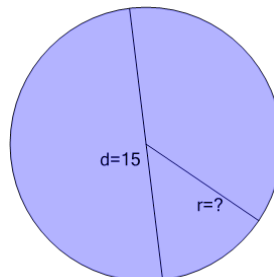
Find the radius of the circle that has the given diameter

A	13.5	B	12.5
C	11.5	D	15.5
E	14.5		

7

Find the radius of the circle that has the given diameter

A	15	B	12
C	13	D	14
E	11		

8

Find the radius of the circle that has the given diameter

A	9.5	B	5.5
C	6.5	D	7.5
E	8.5		