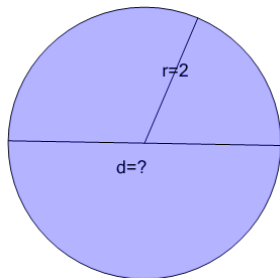




Circles - Find Diameter from Radius

**1**

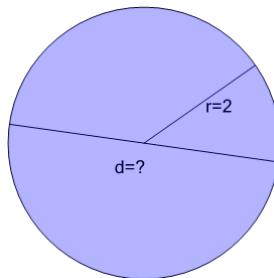
Find the diameter of the circle that has the given radius



A	5	B	2
C	0	D	4
E	7	F	1

2

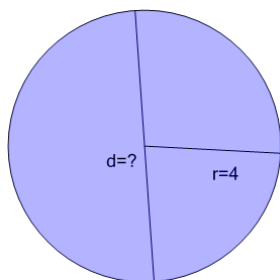
Find the diameter of the circle that has the given radius



A	4	B	8
C	1	D	0
E	6	F	5

3

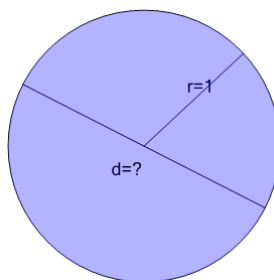
Find the diameter of the circle that has the given radius



A	9	B	10
C	8	D	4
E	12	F	7

4

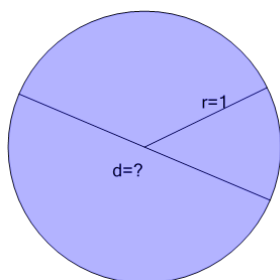
Find the diameter of the circle that has the given radius



A	5	B	0
C	6	D	2
E	1	F	3

5

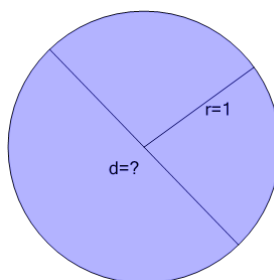
Find the diameter of the circle that has the given radius



A	0	B	1
C	2	D	4
E	6	F	3

6

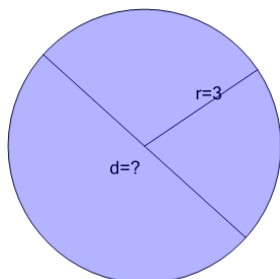
Find the diameter of the circle that has the given radius



A	5	B	1
C	6	D	0
E	2	F	4

7

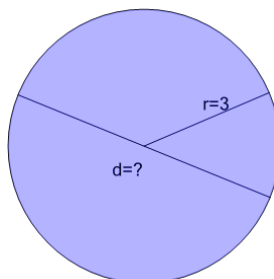
Find the diameter of the circle that has the given radius



A	5	B	9
C	10	D	1
E	8	F	6

8

Find the diameter of the circle that has the given radius



A	4	B	10
C	7	D	6
E	8	F	5