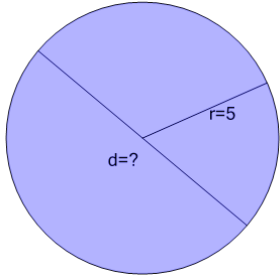


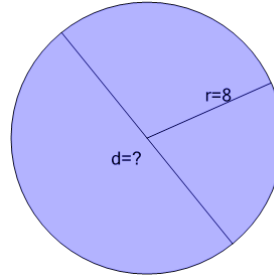


Circles - Find Diameter from Radius

**1**

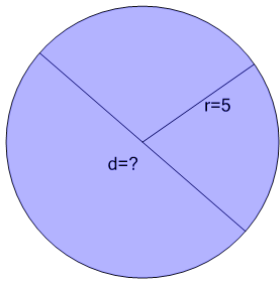
Find the diameter of the circle that has the given radius

A	8	B	5
C	6	D	10
E	13	F	11

2

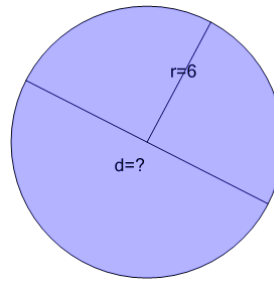
Find the diameter of the circle that has the given radius

A	19	B	16
C	20	D	13
E	18	F	12

3

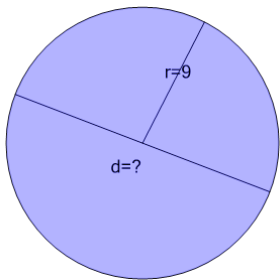
Find the diameter of the circle that has the given radius

A	14	B	11
C	8	D	10
E	13	F	5

4

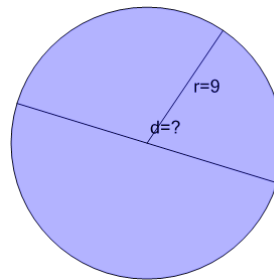
Find the diameter of the circle that has the given radius

A	12	B	11
C	16	D	8
E	9	F	13

5

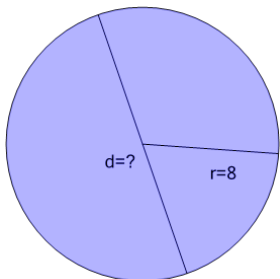
Find the diameter of the circle that has the given radius

A	14	B	13
C	17	D	22
E	16	F	18

6

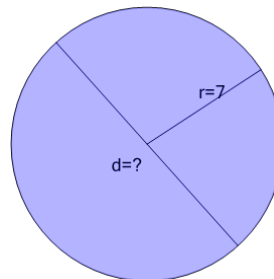
Find the diameter of the circle that has the given radius

A	13	B	16
C	21	D	18
E	22	F	17

7

Find the diameter of the circle that has the given radius

A	17	B	18
C	11	D	20
E	14	F	16

8

Find the diameter of the circle that has the given radius

A	15	B	14
C	18	D	11
E	12	F	16