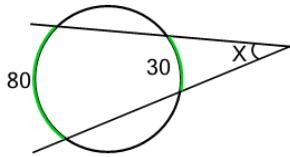
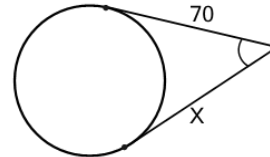


**1** What is angle X?

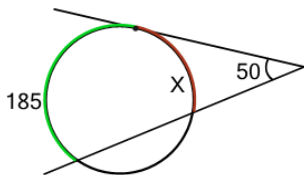
(not to scale)

A	B	C
30	15	5
D	E	F
35	25	40

**2** What is the length of X?

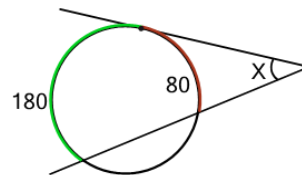
(not to scale)

A	B	C
69	71	68
D	E	F
65	73	70

**3** What is angle X?

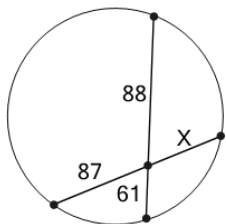
(not to scale)

A	B	C
105	80	65
D	E	F
85	60	

**4** What is angle X?

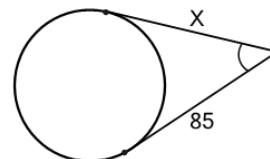
(not to scale)

A	B	C
65	50	40
D	E	F
55	70	

**5** What is the length of X?

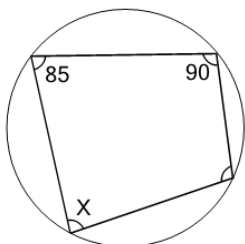
(not to scale)

A	B	C
67	65	62
D	E	F
57	66	58

**6** What is the length of X?

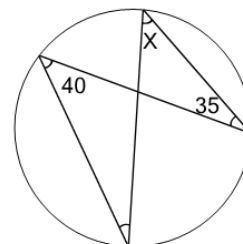
(not to scale)

A	B	C
85	84	89
D	E	F
87	82	88

**7** What is angle X?

(not to scale)

A	B	C
100	65	75
D	E	F
115	90	

**8** What is angle X?

(not to scale)

A	B	C
60	25	15
D	E	F
40	55	50