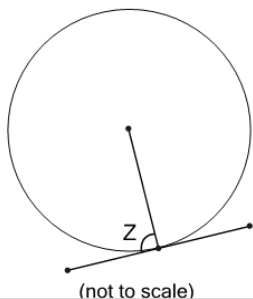


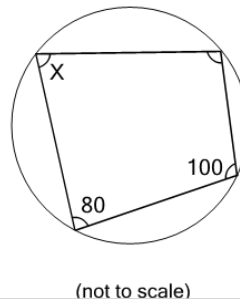


**1** What is angle Z?



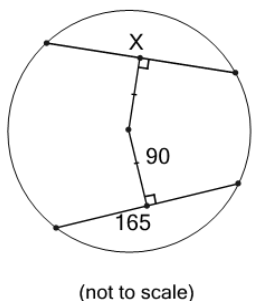
A	B	C
75	100	70
D	E	F
65	90	115

**2** What is angle X?



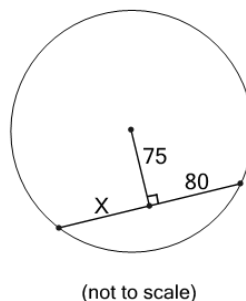
A	B	C
95	65	80
D	E	F
90	105	60

**3** What is the length of X?



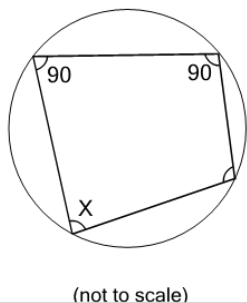
A	B	C
165	75	330
D	E	
90	180	

**4** What is the length of X?



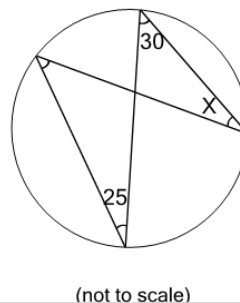
A	B	C
80	160	150
D	E	
75	5	

**5** What is angle X?



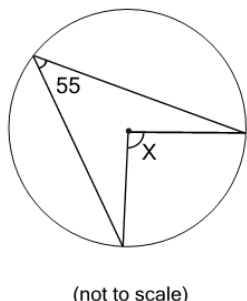
A	B	C
65	75	80
D	E	F
70	95	90

**6** What is angle X?



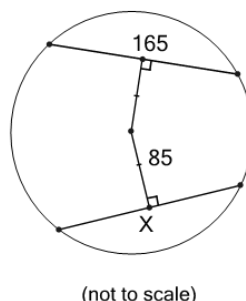
A	B	C
45	50	35
D	E	F
30	25	40

**7** What is angle X?



A	B	C
85	95	110
D	E	F
100	105	90

**8** What is the length of X?



A	B	C
330	85	80
D	E	
165	170	