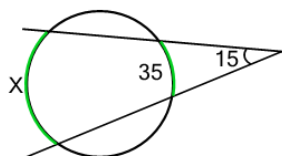


Geometry of Circles - Two Secants Angles Values

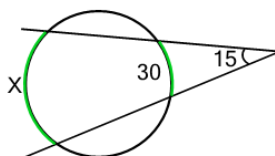
1 What is angle X?



(not to scale)

A	B	C
85	50	55
D	E	F
45	60	65

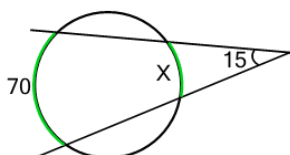
2 What is angle X?



(not to scale)

A	B	C
80	85	70
D	E	F
50	60	40

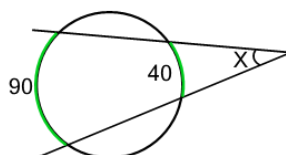
3 What is angle X?



(not to scale)

A	B	C
50	40	55
D	E	F
60	35	25

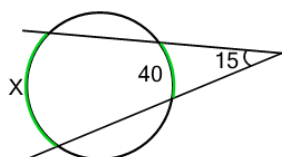
4 What is angle X?



(not to scale)

A	B	C
15	25	10
D	E	F
45	50	40

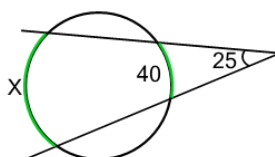
5 What is angle X?



(not to scale)

A	B	C
85	55	65
D	E	F
60	80	70

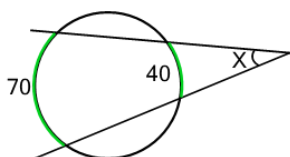
6 What is angle X?



(not to scale)

A	B	C
110	90	100
D	E	
80	70	

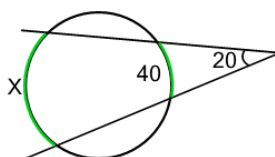
7 What is angle X?



(not to scale)

A	B	C
5	40	15
D	E	
20	25	

8 What is angle X?



(not to scale)

A	B	C
70	60	100
D	E	F
55	80	95