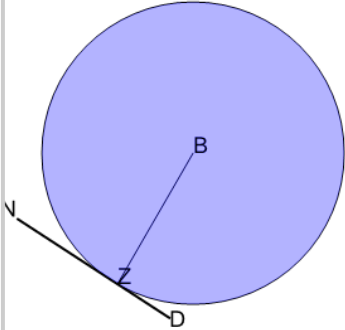


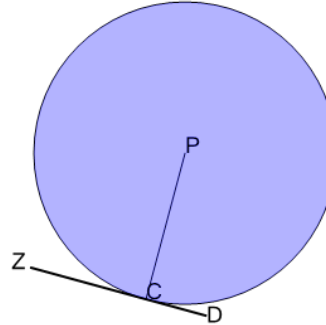


Geometry of Circles - Tangent Angle - Rule

**1**

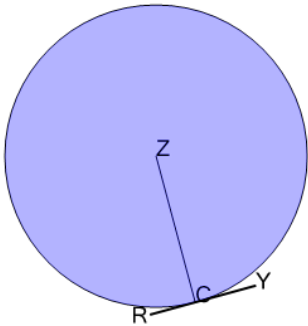
What is known about angle BZN given that DN forms a tangent?

- A BZN is always 60°
- B BZN is always 45°
- C BZN is always 180°
- D BZN is always 90°

2

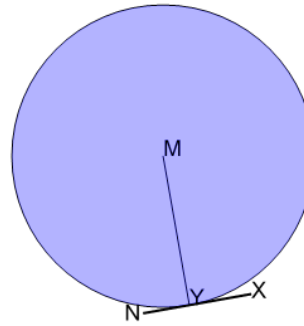
What is known about angle PCZ given that DZ forms a tangent?

- A PCZ is always 180°
- B PCZ is always 60°
- C PCZ is always 90°
- D PCZ is always 45°

3

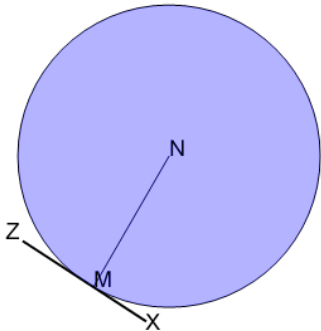
What is known about angle ZCR given that YR forms a tangent?

- A ZCR is always 90°
- B ZCR is always 45°
- C ZCR is always 60°
- D ZCR is always 180°

4

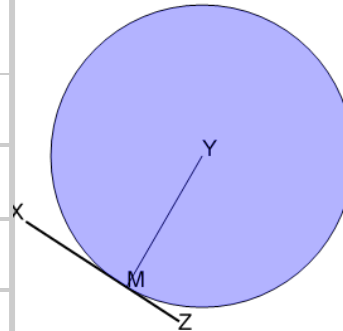
What is known about angle MYN given that XN forms a tangent?

- A MYN is always 180°
- B MYN is always 60°
- C MYN is always 45°
- D MYN is always 90°

5

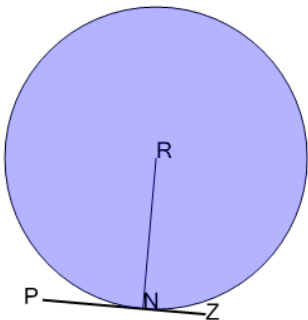
What is known about angle NMZ given that XZ forms a tangent?

- A NMZ is always 45°
- B NMZ is always 90°
- C NMZ is always 60°
- D NMZ is always 180°

6

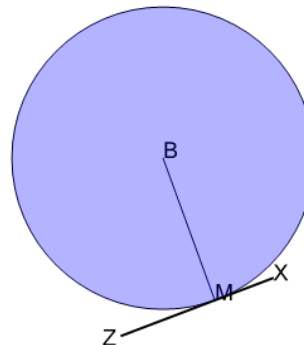
What is known about angle YMX given that ZX forms a tangent?

- A YMX is always 45°
- B YMX is always 180°
- C YMX is always 90°
- D YMX is always 60°

7

What is known about angle RNP given that ZP forms a tangent?

- A RNP is always 60°
- B RNP is always 180°
- C RNP is always 45°
- D RNP is always 90°

8

What is known about angle BMZ given that XZ forms a tangent?

- A BMZ is always 45°
- B BMZ is always 90°
- C BMZ is always 180°
- D BMZ is always 60°