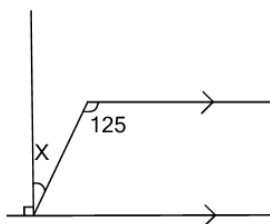




Geometry Solve Angle - Parallel Lines with Angle and Right Connection



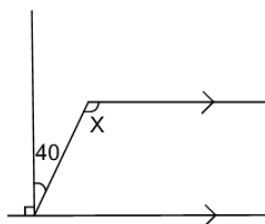
1 What is angle X?



(not to scale)

A	B	C
35	60	15
D	E	
20	55	

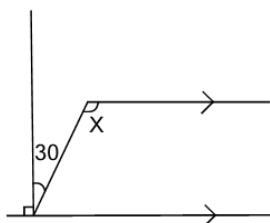
2 What is angle X?



(not to scale)

A	B	C
130	145	155
D	E	F
110	135	140

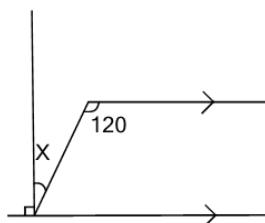
3 What is angle X?



(not to scale)

A	B	C
145	100	140
D	E	F
120	125	135

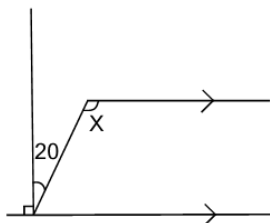
4 What is angle X?



(not to scale)

A	B	C
30	10	45
D	E	F
20	40	25

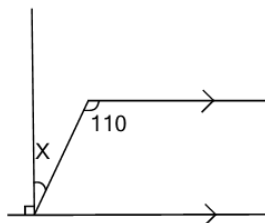
5 What is angle X?



(not to scale)

A	B	C
100	110	105
D	E	
130	90	

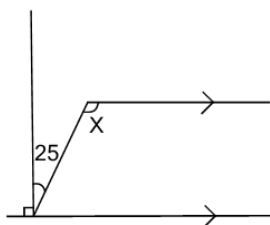
6 What is angle X?



(not to scale)

A	B	C
40	15	20
D	E	F
45	5	35

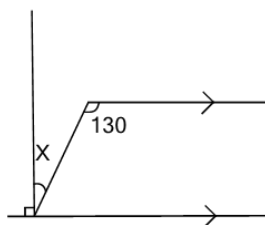
7 What is angle X?



(not to scale)

A	B	C
115	110	125
D	E	F
120	100	90

8 What is angle X?



(not to scale)

A	B	C
65	40	20
D	E	F
55	15	35