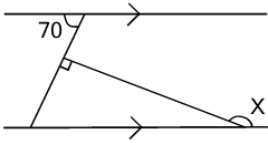




## Geometry Solve Angle - Parallel Lines with Triangle to Middle Of Crossing Line



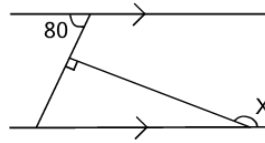
**1** What is angle X?



(not to scale)

A	B	C
155	140	160
D	E	
145	135	

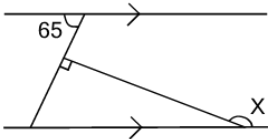
**2** What is angle X?



(not to scale)

A	B	C
160	170	150
D	E	
185	195	

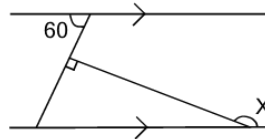
**3** What is angle X?



(not to scale)

A	B	C
130	140	145
D	E	F
155	180	135

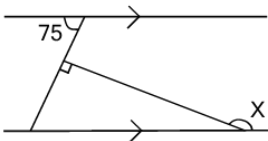
**4** What is angle X?



(not to scale)

A	B	C
150	140	160
D	E	
155	175	

**5** What is angle X?



(not to scale)

A	B	C
180	185	165
D	E	
170	175	