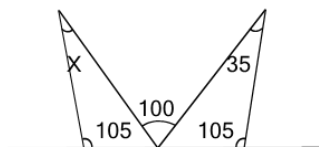




## Geometry Solve Angle - Triangles Leaning Apart From Center

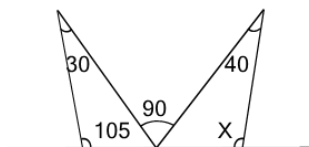
**1** What is angle X?



(not to scale)

A	B	C
30	50	25
D	E	
55	35	

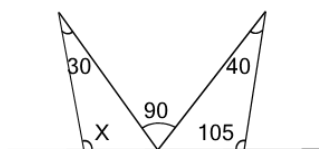
**2** What is angle X?



(not to scale)

A	B	C
120	105	90
D	E	F
100	80	95

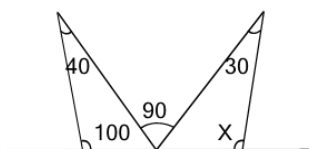
**3** What is angle X?



(not to scale)

A	B	C
90	95	120
D	E	F
70	105	85

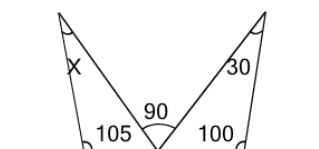
**4** What is angle X?



(not to scale)

A	B	C
75	115	95
D	E	F
120	100	125

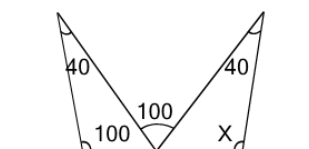
**5** What is angle X?



(not to scale)

A	B	C
35	15	30
D	E	F
50	40	45

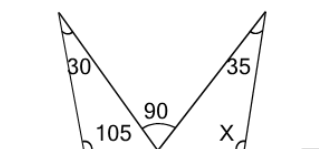
**6** What is angle X?



(not to scale)

A	B	C
100	95	110
D	E	
115	120	

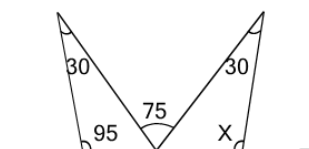
**7** What is angle X?



(not to scale)

A	B	C
95	105	80
D	E	F
100	120	90

**8** What is angle X?



(not to scale)

A	B	C
105	125	85
D	E	F
75	100	120