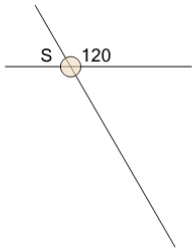




Geometry of Lines - Crossing Lines Solve Angle



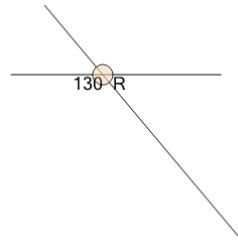
1



What do we know about angle 'S'?

A	30	B	120
C	45	D	60
E	90	F	150

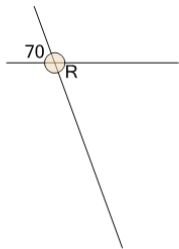
2



What do we know about angle 'R'?

A	40	B	60
C	90	D	45
E	140	F	50

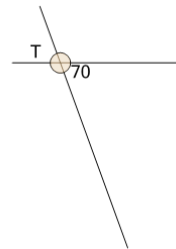
3



What do we know about angle 'R'?

A	160	B	45
C	60	D	90
E	70	F	20

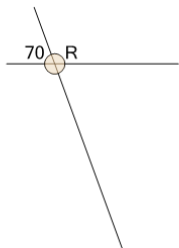
4



What do we know about angle 'T'?

A	90	B	70
C	20	D	45
E	60	F	160

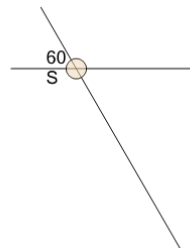
5



What do we know about angle 'R'?

A	20	B	160
C	110	D	60
E	45	F	90

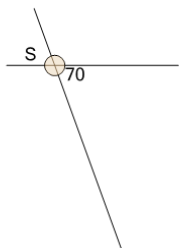
6



What do we know about angle 'S'?

A	120	B	60
C	150	D	90
E	45	F	30

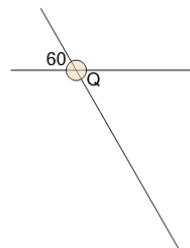
7



What do we know about angle 'S'?

A	20	B	60
C	45	D	160
E	90	F	70

8



What do we know about angle 'Q'?

A	120	B	60
C	90	D	150
E	45	F	30