
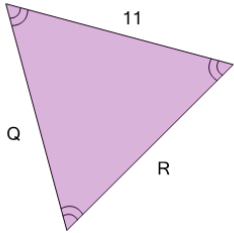


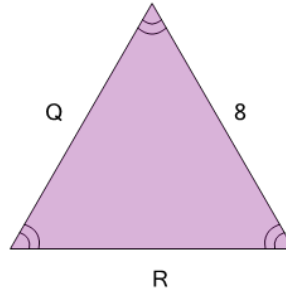


Geometry of Triangles - Equilateral, Solve Side

**1**

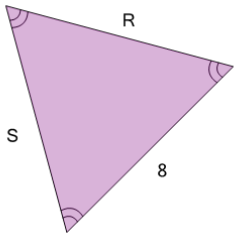
What do we know about side 'Q'?

A	8	B	10
C	12	D	9
E	11	F	15

2

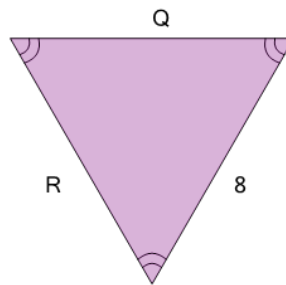
What do we know about side 'R'?

A	5
B	6
C	12
D	Unable to answer
E	7
F	8

3

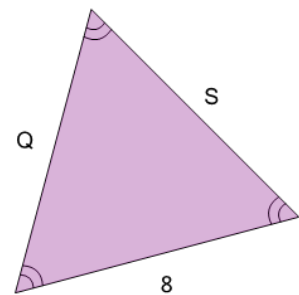
What do we know about side 'R'?

A	9	B	5
C	8	D	11
E	4	F	7

4

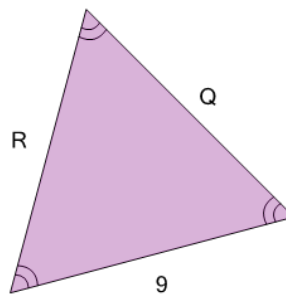
What do we know about side 'R'?

A	Unable to answer
B	11
C	8
D	9
E	12

5

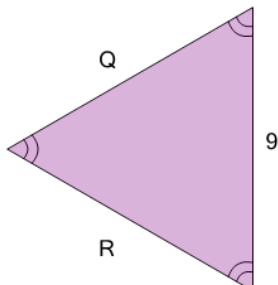
What do we know about side 'Q'?

A	Unable to answer
B	11
C	5
D	6
E	7
F	8

6

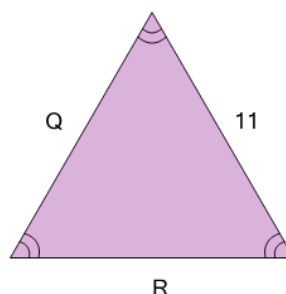
What do we know about side 'R'?

A	Unable to answer
B	6
C	12
D	13
E	9

7

What do we know about side 'Q'?

A	9
B	Unable to answer
C	11
D	7
E	13
F	10

8

What do we know about side 'R'?

A	Unable to answer
B	11
C	13
D	15
E	8
F	12